



GRADE 2

MEASUREMENT

WORKBOOK 3






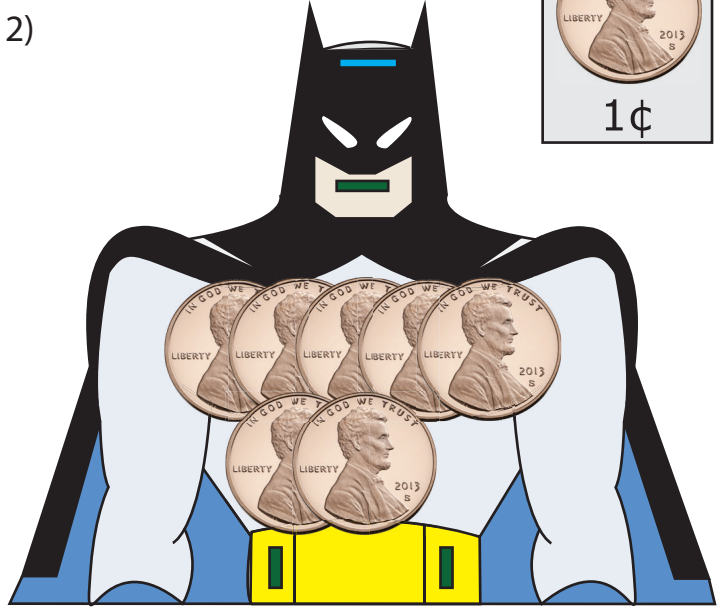
Counting Pennies

Date _____


1)




2)



3)



4)







Counting Pennies

Date _____


1)




2)



3)



4)





Counting Nickels

Date _____



= _____



= _____



= _____



= _____

5) How many cents are there in a Nickel?

6) How many cents make 4 Nickels?

7) How many cents are there in 10 Nickels?




Counting Nickels

Date _____



1)  = _____

2)  = _____

3)  = _____

4)  = _____

5) How many cents make 5 Nickels?

6) How many cents are there in 2 Nickels?

7) How many cents are there in 3 Nickels?



Counting Dimes

Date _____



= _____



= _____



= _____



= _____

5) How many cents make 3 Dimes?

6) How many cents are there in 10 Dimes?

7) How many cents make 6 Dimes?



Counting Dimes

Date _____



= _____



= _____



= _____



= _____

5) How many cents are there in 9 Dimes?

6) How many cents make 1 Dime?

7) How many cents are there in 7 Dimes?



Counting Quarters

Date _____



= _____



= _____



= _____



= _____

5) How many cents make 5 Quarters?

6) How many cents are there in 2 Quarters?

7) How many cents make 9 Quarters?



Counting Quarters

Date _____



= _____



= _____



= _____



= _____

5) How many cents are there in 10 Quarters?

6) How many cents make a Quarter?

7) How many cents are there in 7 Quarters?



Counting Coins

Date _____

1)



= _____

2)



= _____

3)



= _____

4)



= _____

5)



= _____

6)



= _____



Counting Bills

Date _____

1)



= _____

2)



= _____

3)



= _____

4)



= _____

5)



= _____



Counting Bills & Coins

Date _____

1)  = _____

2)  = _____

3)  = _____

4)  = _____

5)  = _____



Activity - Matching

Date _____

1)



•

•

80¢

2)



•

•

6¢

3)



•

•

25¢

4)



•

•

75¢

5)



•

•

200¢




Cut & Paste Activity

Date _____

1)




2)



3)



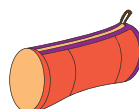
4)



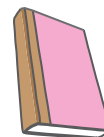
\$2.75



\$10.00



\$4.05



\$5.11



\$3.20