




Valentine's Day - Counting

Name _____


Score _____

VD:07

Count the pictures and write the number.















Valentine's Day - Counting


Name _____

Score _____

Answer key

VD:07


Count the pictures and write the number.



10



8



5



11



1



3
