



# Ordering Angles

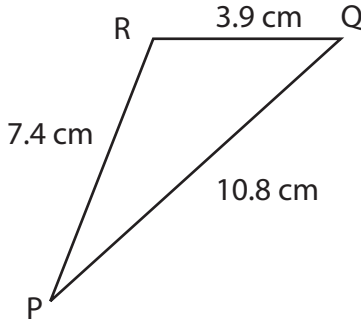
Name \_\_\_\_\_

Score \_\_\_\_\_

TI:24

Name the smallest and largest angle in each triangle.

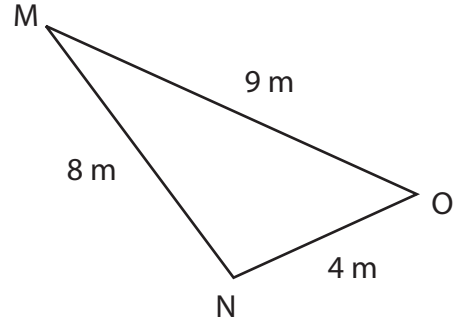
1)



Smallest angle : \_\_\_\_\_

Largest angle : \_\_\_\_\_

2)



Smallest angle : \_\_\_\_\_

Largest angle : \_\_\_\_\_

Order the angles in each triangle. Complete the table.

Triangles	Smallest to largest	Largest to smallest



# Ordering Angles

Name \_\_\_\_\_

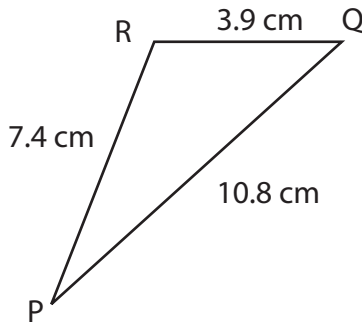
Score \_\_\_\_\_

## Answer key

TI:24

Name the smallest and largest angle in each triangle.

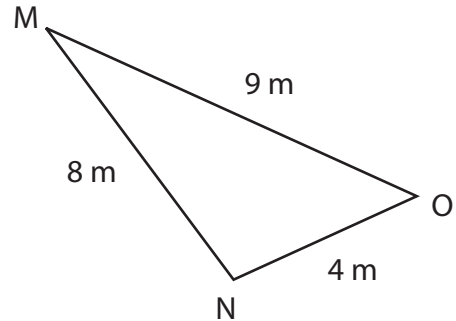
1)



Smallest angle :      $\angle P$     

Largest angle :      $\angle R$     

2)



Smallest angle :      $\angle M$     

Largest angle :      $\angle N$     

Order the angles in each triangle. Complete the table.

Triangles	Smallest to largest	Largest to smallest
	$\angle H, \angle G, \angle F$	$\angle F, \angle G, \angle H$
	$\angle O, \angle M, \angle N$	$\angle N, \angle M, \angle O$
	$\angle K, \angle J, \angle L$	$\angle L, \angle J, \angle K$