



UNIT FRACTIONS

Name _____

Score _____

TF:39

Circle all unit fractions.

$\frac{1}{4}$

$\frac{15}{16}$

$\frac{1}{13}$

$\frac{6}{7}$

$\frac{1}{10}$

$\frac{5}{6}$

$\frac{1}{3}$

$\frac{5}{19}$

$\frac{1}{18}$

$\frac{22}{27}$

$\frac{1}{19}$

$\frac{9}{21}$

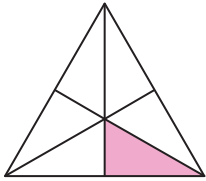
$\frac{1}{8}$

$\frac{1}{11}$

$\frac{1}{5}$


Match the following.

1)



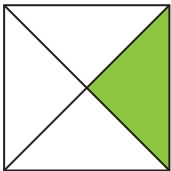
$\frac{1}{12}$

2)



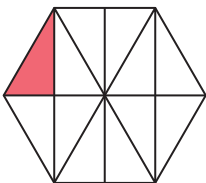
$\frac{1}{6}$

3)



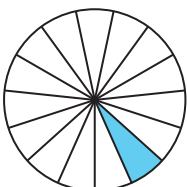
$\frac{1}{15}$

4)



$\frac{1}{9}$

5)



$\frac{1}{4}$



UNIT FRACTIONS

Name _____

Score _____

Answer key

TF:39

Circle all unit fractions.

$\frac{1}{4}$

$\frac{15}{16}$

$\frac{1}{13}$

$\frac{6}{7}$

$\frac{1}{10}$

$\frac{5}{6}$

$\frac{1}{3}$

$\frac{5}{19}$

$\frac{1}{18}$

$\frac{22}{27}$

$\frac{1}{19}$

$\frac{9}{21}$

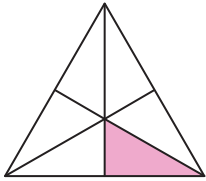
$\frac{1}{8}$

$\frac{1}{11}$

$\frac{1}{5}$


Match the following.

1)



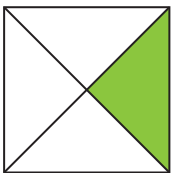
$\frac{1}{12}$

2)



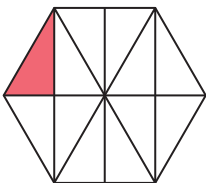
$\frac{1}{6}$

3)



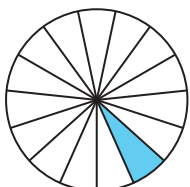
$\frac{1}{15}$

4)



$\frac{1}{9}$

5)



$\frac{1}{4}$