



UNIT FRACTIONS

Name _____

Score _____

TF:38

Circle all unit fractions.

$\frac{5}{11}$

$\frac{1}{2}$

$\frac{7}{16}$

$\frac{1}{10}$

$\frac{9}{8}$

$\frac{1}{7}$

$\frac{9}{19}$

$\frac{1}{24}$

$\frac{12}{17}$

$\frac{1}{22}$

$\frac{1}{16}$

$\frac{1}{12}$

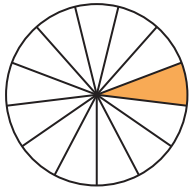
$\frac{3}{5}$

$\frac{1}{4}$

$\frac{10}{11}$

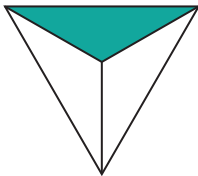
Match the following.

1)



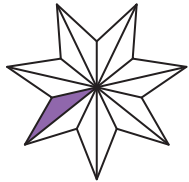
$\frac{1}{3}$

2)



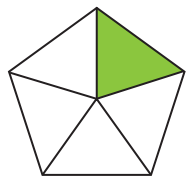
$\frac{1}{8}$

3)




$\frac{1}{13}$

4)



$\frac{1}{14}$

5)



$\frac{1}{5}$



UNIT FRACTIONS

Name _____

Score _____

Answer key

TF:38

Circle all unit fractions.

$\frac{5}{11}$

$\frac{1}{2}$

$\frac{7}{16}$

$\frac{1}{10}$

$\frac{9}{8}$

$\frac{1}{7}$

$\frac{9}{19}$

$\frac{1}{24}$

$\frac{12}{17}$

$\frac{1}{22}$

$\frac{1}{16}$

$\frac{1}{12}$

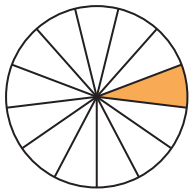
$\frac{3}{5}$

$\frac{1}{4}$

$\frac{10}{11}$

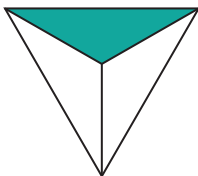
Match the following.

1)



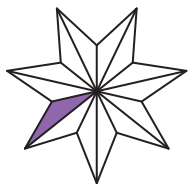
$\frac{1}{3}$

2)



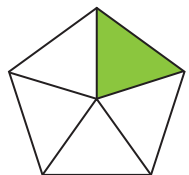
$\frac{1}{8}$

3)




$\frac{1}{13}$

4)



$\frac{1}{14}$

5)



$\frac{1}{5}$