



UNIT FRACTIONS

Name _____

Score _____

TF:37

Circle all unit fractions.

$\frac{1}{11}$

$\frac{12}{23}$

$\frac{1}{19}$

$\frac{13}{15}$

$\frac{1}{14}$

$\frac{6}{19}$

$\frac{1}{3}$

$\frac{8}{10}$

$\frac{1}{7}$

$\frac{1}{21}$

$\frac{1}{25}$

$\frac{1}{5}$

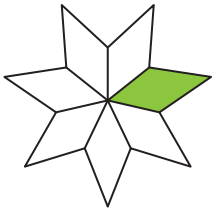
$\frac{1}{18}$

$\frac{1}{27}$

$\frac{2}{5}$

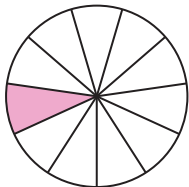
Match the following.

1)



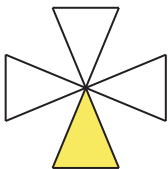
$\frac{1}{4}$

2)



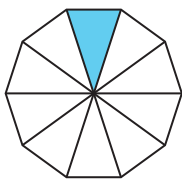
$\frac{1}{10}$

3)



$\frac{1}{2}$

4)



$\frac{1}{7}$

5)



$\frac{1}{11}$



UNIT FRACTIONS

Name _____

Score _____

Answer key

TF:37

Circle all unit fractions.

$\frac{1}{11}$

$\frac{12}{23}$

$\frac{1}{19}$

$\frac{13}{15}$

$\frac{1}{14}$

$\frac{6}{19}$

$\frac{1}{3}$

$\frac{8}{10}$

$\frac{1}{7}$

$\frac{1}{21}$

$\frac{1}{25}$

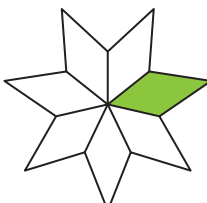
$\frac{1}{5}$

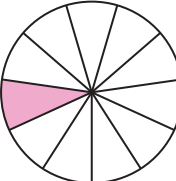
$\frac{1}{18}$

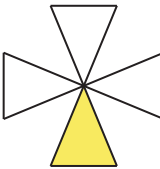
$\frac{1}{27}$

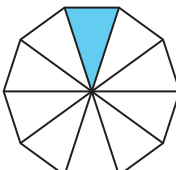
$\frac{2}{5}$


Match the following.

1)  $\frac{1}{4}$

2)  $\frac{1}{10}$

3)  $\frac{1}{2}$

4)  $\frac{1}{7}$

5)  $\frac{1}{11}$