



FRACTIONS

Name _____

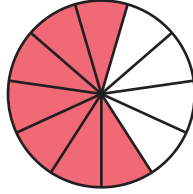
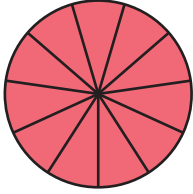
Score _____

TF:27

Color the pie for the given fraction.

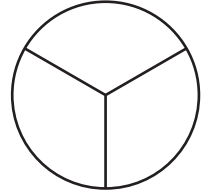
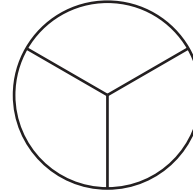
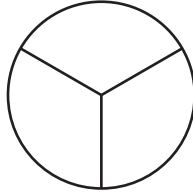
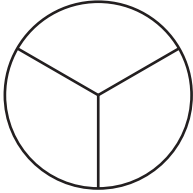
1)

$$1 \frac{7}{11} =$$



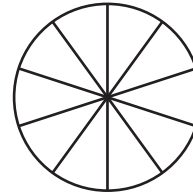
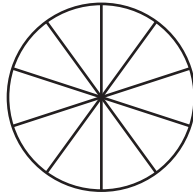
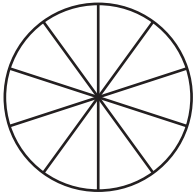
2)

$$3 \frac{1}{3} =$$



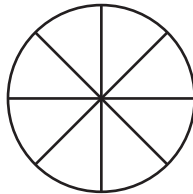
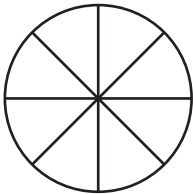
3)

$$2 \frac{4}{10} =$$



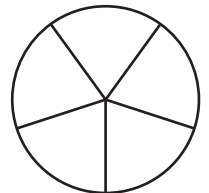
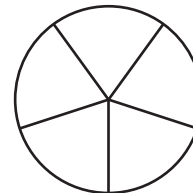
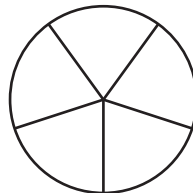
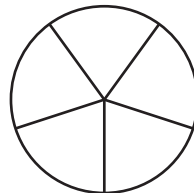
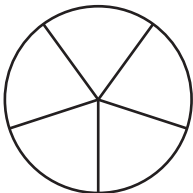
4)

$$1 \frac{7}{8} =$$



5)

$$4 \frac{2}{5} =$$





FRACTIONS

Name _____

Score _____

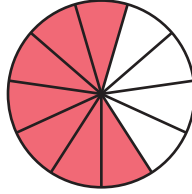
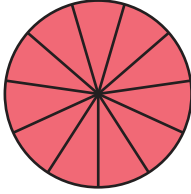
Answer key

TF:27

Color the pie for the given fraction.

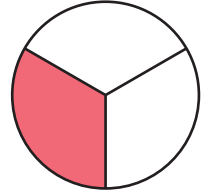
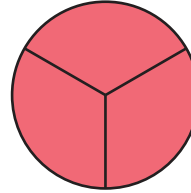
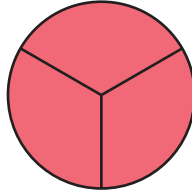
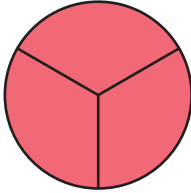
1)

$$1 \frac{7}{11} =$$



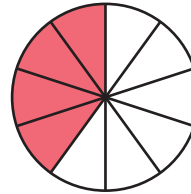
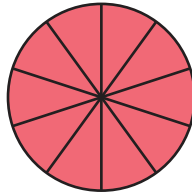
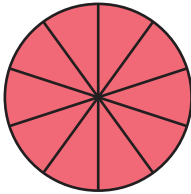
2)

$$3 \frac{1}{3} =$$



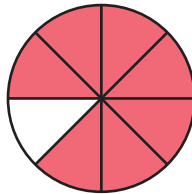
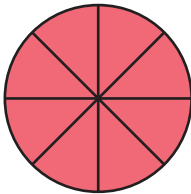
3)

$$2 \frac{4}{10} =$$



4)

$$1 \frac{7}{8} =$$



5)

$$4 \frac{2}{5} =$$

