



FRACTIONS

Name _____

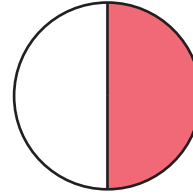
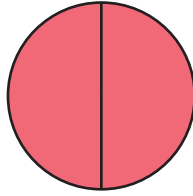
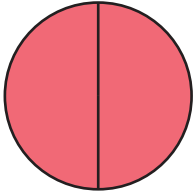
Score _____

TF:26

Color the pie for the given fraction.

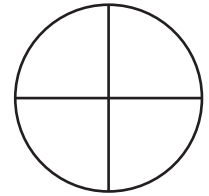
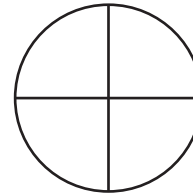
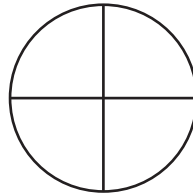
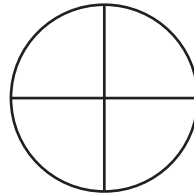
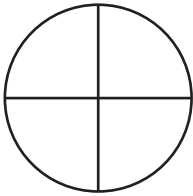
1)

$$2\frac{1}{2} =$$



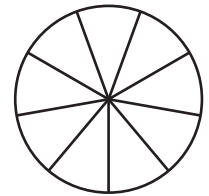
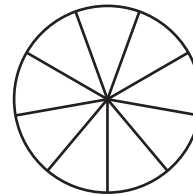
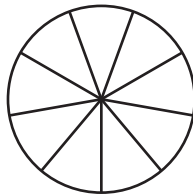
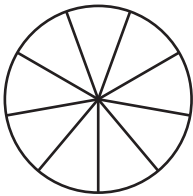
2)

$$4\frac{3}{4} =$$



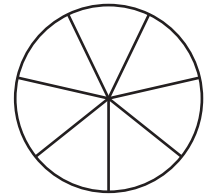
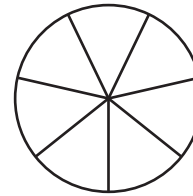
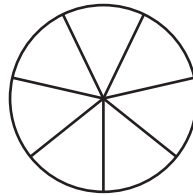
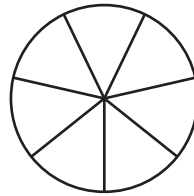
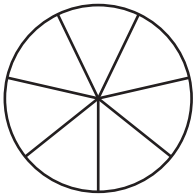
3)

$$3\frac{6}{9} =$$



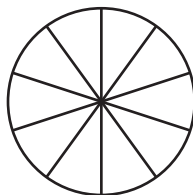
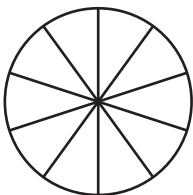
4)

$$4\frac{4}{7} =$$



5)

$$1\frac{9}{10} =$$





FRACTIONS

Name _____

Score _____

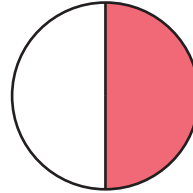
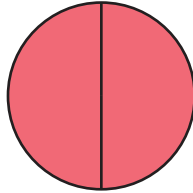

Answer key

TF:26

Color the pie for the given fraction.

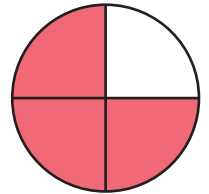
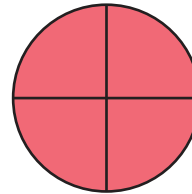
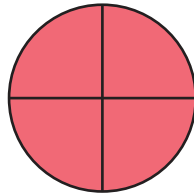
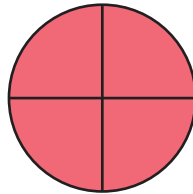

1)

$$2\frac{1}{2} =$$



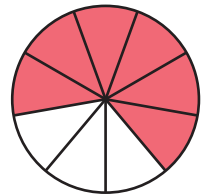
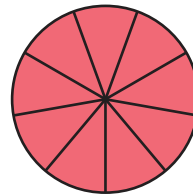
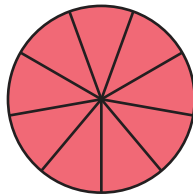
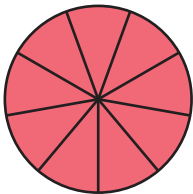
2)

$$4\frac{3}{4} =$$



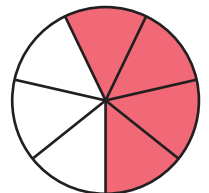
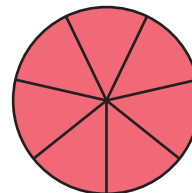
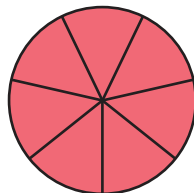
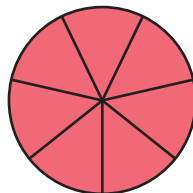
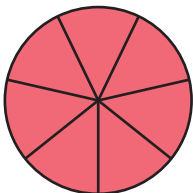
3)

$$3\frac{6}{9} =$$



4)

$$4\frac{4}{7} =$$



5)

$$1\frac{9}{10} =$$

