



FRACTIONS

Name _____

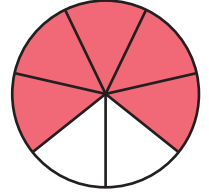
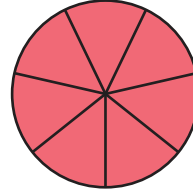
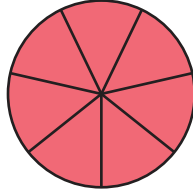
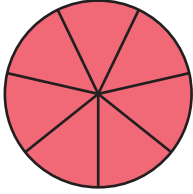
Score _____

TF:25

Color the pie for the given fraction.

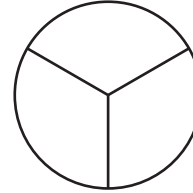
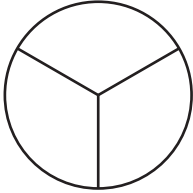
1)

$$3\frac{5}{7} =$$



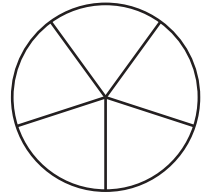
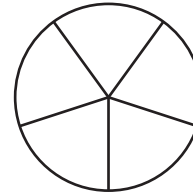
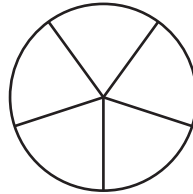
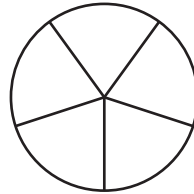
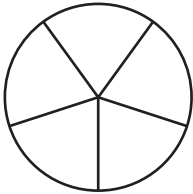
2)

$$1\frac{2}{3} =$$



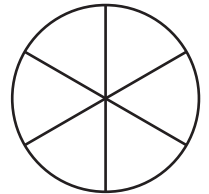
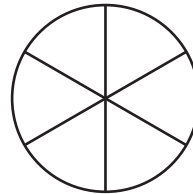
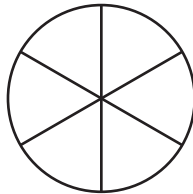
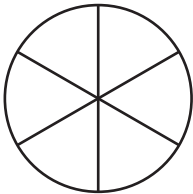
3)

$$4\frac{4}{5} =$$



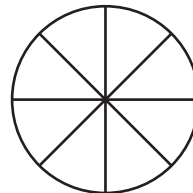
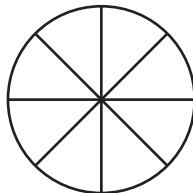
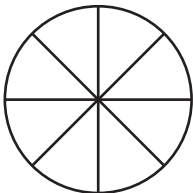
4)

$$3\frac{1}{6} =$$



5)

$$2\frac{3}{8} =$$





FRACTIONS

Name _____

Score _____

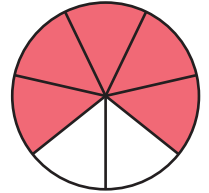
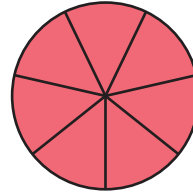
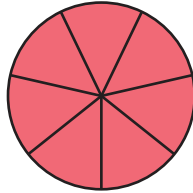
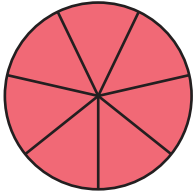
Answer key

TF:25

Color the pie for the given fraction.

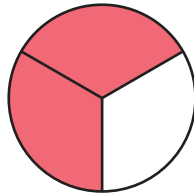
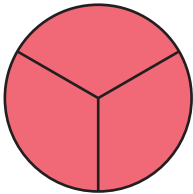
1)

$$3\frac{5}{7} =$$



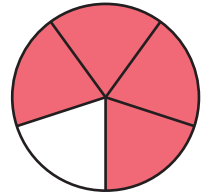
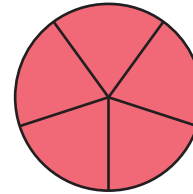
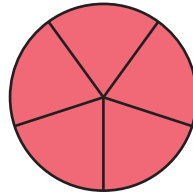
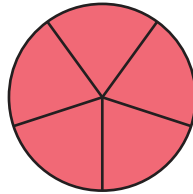
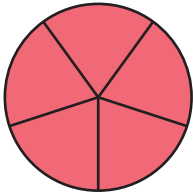
2)

$$1\frac{2}{3} =$$



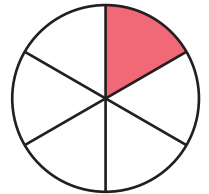
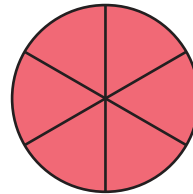
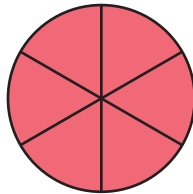
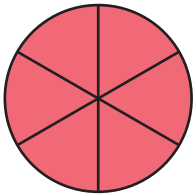
3)

$$4\frac{4}{5} =$$



4)

$$3\frac{1}{6} =$$



5)

$$2\frac{3}{8} =$$

