



FRACTIONS

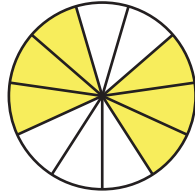
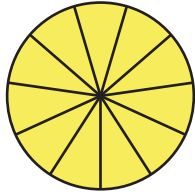
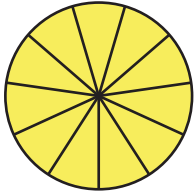
Name _____

Score _____

TF:23

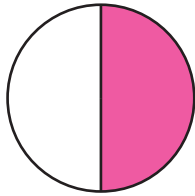

What is the fraction of the shaded part?

1)



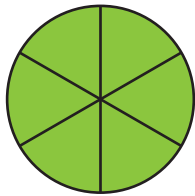
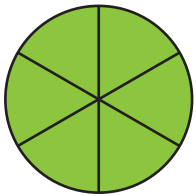
=

2)



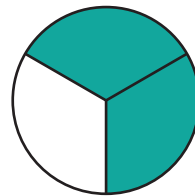
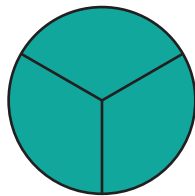
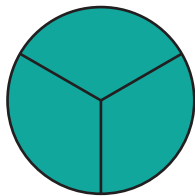
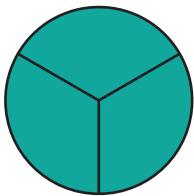
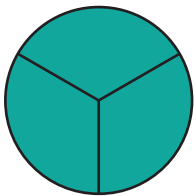
=

3)



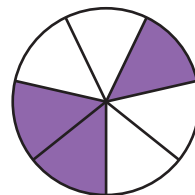
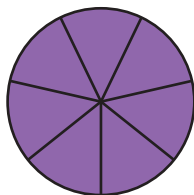
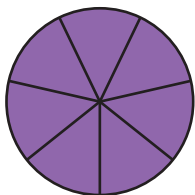
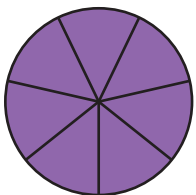
=

4)



=

5)



=



FRACTIONS

Name _____

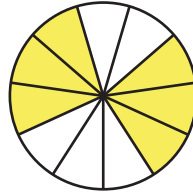
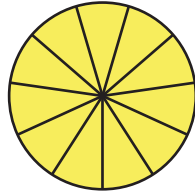
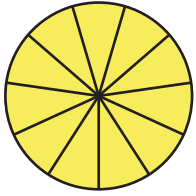
Score _____

Answer key

TF:23

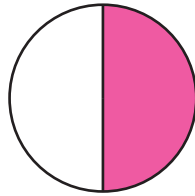

What is the fraction of the shaded part?

1)



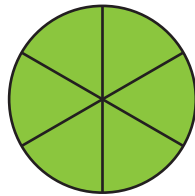
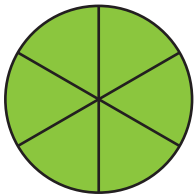
$$= 2\frac{6}{11}$$

2)



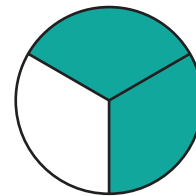
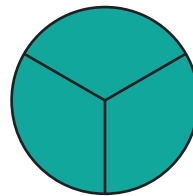
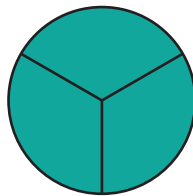
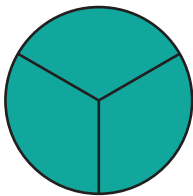
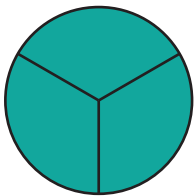
$$= 1\frac{1}{2}$$

3)



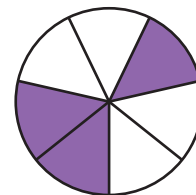
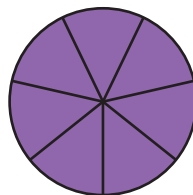
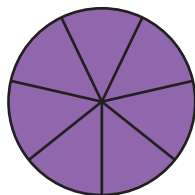
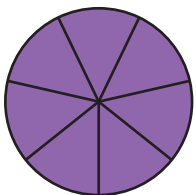
$$= 2\frac{4}{6}$$

4)



$$= 4\frac{2}{3}$$

5)



$$= 3\frac{3}{7}$$