



# TYPES OF FRACTIONS

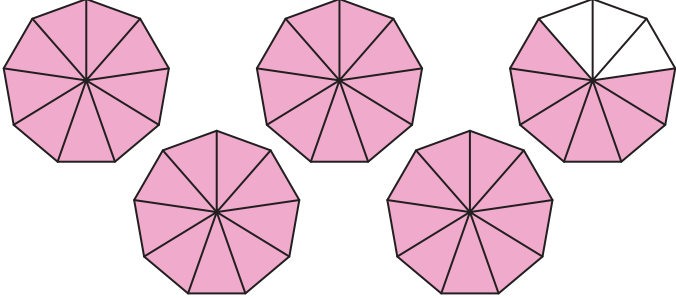


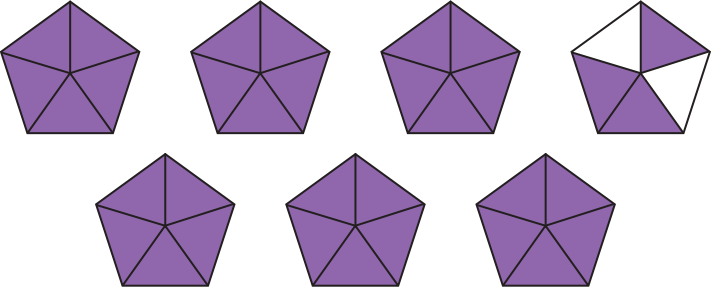
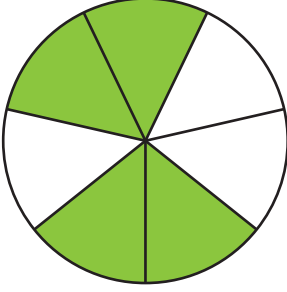
Name \_\_\_\_\_

Score \_\_\_\_\_

TF:09

Represent the colored part using fractions and check what fractions they are.

(Hint: Mixed fractions can be converted into improper fractions)

| Shapes  | Proper Fractions | Improper Fractions | Mixed Fractions |
|---|------------------|--------------------|-----------------|
|     |                  | $\frac{42}{9}$     | $4\frac{6}{9}$  |
|    |                  |                    |                 |
|  |                  |                    |                 |
|   |                  |                    |                 |
|  |                  |                    |                 |



# TYPES OF FRACTIONS

Name \_\_\_\_\_

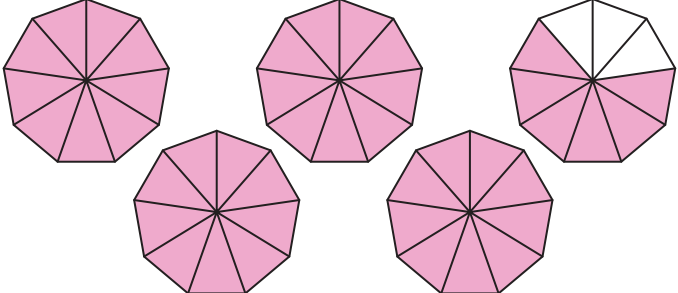


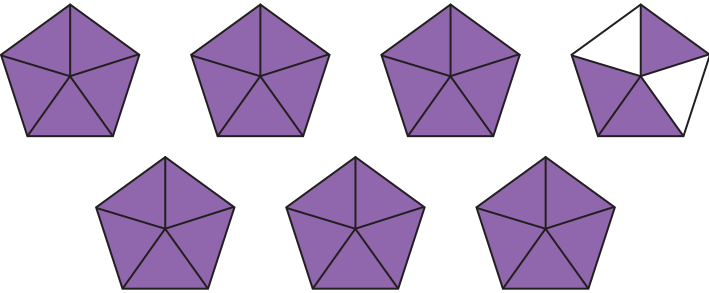
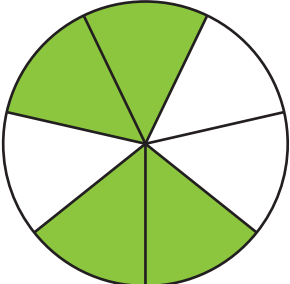
Score \_\_\_\_\_

## Answer key

TF:09

Represent the colored part using fractions and check what fractions they are.

(Hint: Mixed fractions can be converted into improper fractions)

| Shapes  | Proper Fractions | Improper Fractions | Mixed Fractions |
|---|------------------|--------------------|-----------------|
|     |                  | $\frac{42}{9}$     | $4\frac{6}{9}$  |
|    |                  | $\frac{29}{4}$     | $7\frac{1}{4}$  |
|  | $\frac{8}{11}$   |                    |                 |
|   |                  | $\frac{33}{5}$     | $6\frac{3}{5}$  |
|  | $\frac{4}{7}$    |                    |                 |