




# IDENTIFY SHAPES

Name \_\_\_\_\_

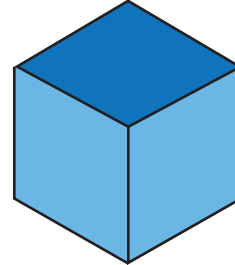
Score \_\_\_\_\_

TD17

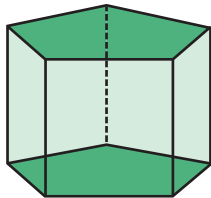
Identify each shape and name them from the suggestions shown at the end of the page.




\_\_\_\_\_



\_\_\_\_\_



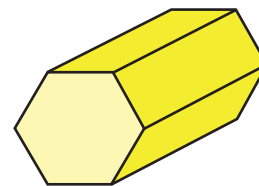
\_\_\_\_\_



\_\_\_\_\_



\_\_\_\_\_



\_\_\_\_\_

*Sphere*

*Cuboid*

*Cone*

*Triangle*

*Pentagonal prism*

*Hexagonal prism*

*Cylinder*

*Oval*

*Cube*



# IDENTIFY SHAPES


Name \_\_\_\_\_

Score \_\_\_\_\_

## Answer key

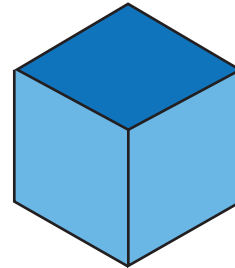
TD17

Identify each shape and name them from the suggestions shown at the end of the page.



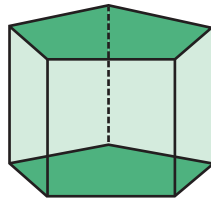
*Cylinder*

---




*Cube*

---



*Pentagonal prism*

---



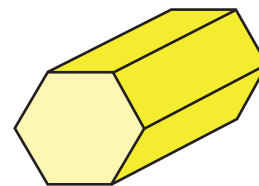
*Triangle*

---



*Cuboid*

---



*Hexagonal prism*

---

*Sphere*

*Cuboid*

*Cone*

*Triangle*

*Pentagonal prism*

*Hexagonal prism*

*Cylinder*

*Oval*

*Cube*