



2D AND 3D SHAPES

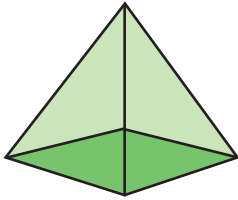
Name _____

Score _____

TD14

Name each shape and find if they are 2D or 3D shape.


1)



2D shape

3D shape


2)



2D shape

3D shape

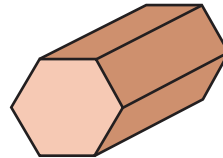
3)



2D shape

3D shape

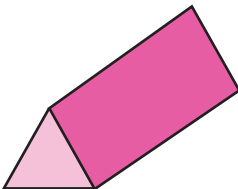
4)



2D shape

3D shape

5)



2D shape

3D shape

6)



2D shape

3D shape



2D AND 3D SHAPES

Name _____

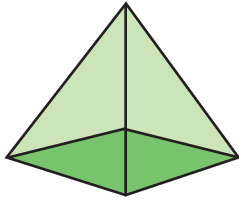
Score _____

Answer key

TD14

Name each shape and find if they are 2D or 3D shape.


1)



- 2D shape
 3D shape

Square pyramid


2)



- 2D shape
 3D shape

Triangle

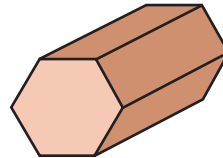
3)



- 2D shape
 3D shape

Rhombus

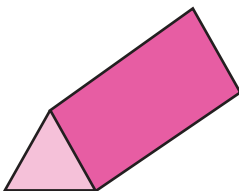
4)



- 2D shape
 3D shape

Hexagonal prism

5)



- 2D shape
 3D shape

Triangular prism

6)



- 2D shape
 3D shape

Rectangle