



SYMMETRY

Name _____

Score _____

SY:24

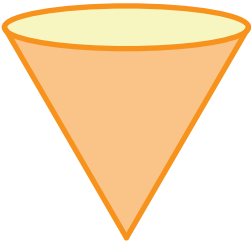
Match the following.

1)




2 Lines of symmetry

2)



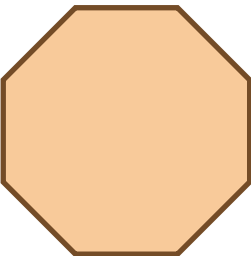
Asymmetric Shapes

3)




8 Lines of symmetry

4)



4 Lines of symmetry

5)



1 Lines of symmetry



SYMMETRY

Name _____

Score _____

Answer key

SY:24

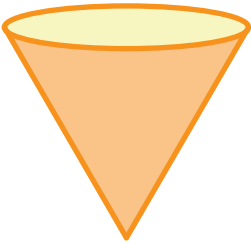
Match the following.

1)




2 Lines of symmetry

2)



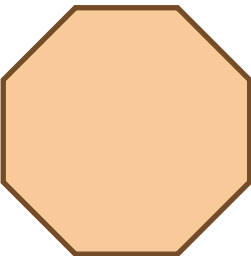
Asymmetric Shapes

3)




8 Lines of symmetry

4)



4 Lines of symmetry

5)



1 Lines of symmetry