



SYMMETRY

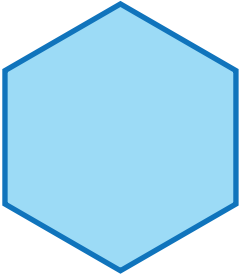
Name _____

Score _____

SY:23


Match the following.

1)



9 Lines of symmetry

2)




4 Lines of symmetry

3)




2 Lines of symmetry

4)



6 Lines of symmetry

5)



Asymmetric Shapes



SYMMETRY

Name _____

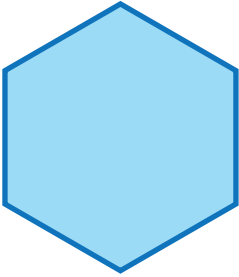
Score _____

Answer key


SY:23

Match the following.


1)




2)




3)



4)



5)



9 Lines of symmetry

4 Lines of symmetry

2 Lines of symmetry

6 Lines of symmetry

Asymmetric Shapes