



# SYMMETRY

Name \_\_\_\_\_

Score \_\_\_\_\_

SY:22


Match the following.

1)




**7 Lines of symmetry**

2)




**3 Lines of symmetry**

3)



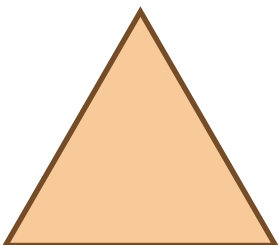
**Asymmetric Shapes**

4)



**5 Lines of symmetry**

5)



**10 Lines of symmetry**



# SYMMETRY

Name \_\_\_\_\_

Score \_\_\_\_\_

## Answer key

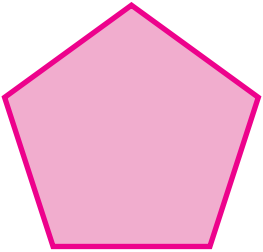
SY:22

Match the following.


1)




2)



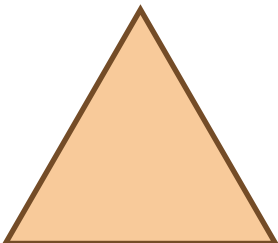
3)



4)



5)



7 Lines of symmetry

3 Lines of symmetry

Asymmetric Shapes

5 Lines of symmetry

10 Lines of symmetry