



# SYMMETRY


Name \_\_\_\_\_

Score \_\_\_\_\_

SY:09

Mention the number of all possible lines of symmetry for the following shapes.

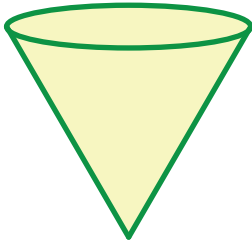
1)



6

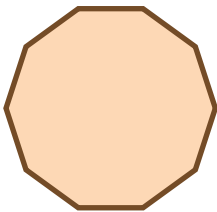
\_\_\_\_\_

2)




\_\_\_\_\_

3)



\_\_\_\_\_

4)




\_\_\_\_\_

5)



\_\_\_\_\_

6)




\_\_\_\_\_

7)



\_\_\_\_\_

8)



\_\_\_\_\_



# SYMMETRY

Name \_\_\_\_\_


Score \_\_\_\_\_

## Answer key

SY:09

Mention the number of all possible lines of symmetry for the following shapes.

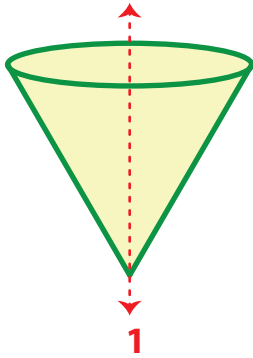
1)



6

---

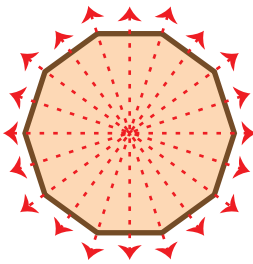
2)



1

---

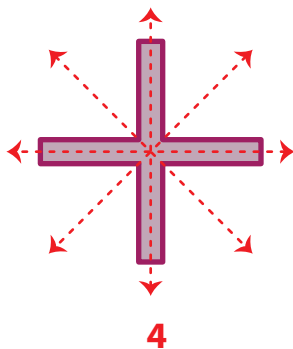
3)



10

---

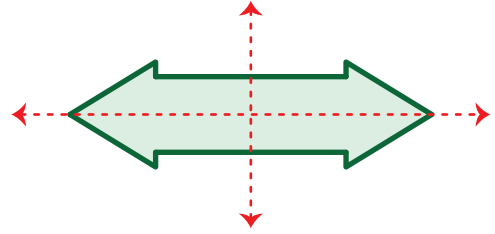
4)



4

---


5)



2

---

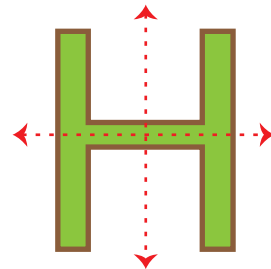
6)



9

---

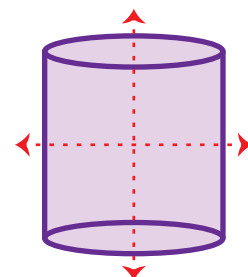
7)



2

---

8)



2

---