



SYMMETRY

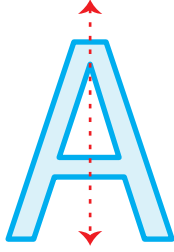
Name _____

Score _____

SY:08


Mention the number of all possible lines of symmetry for the following shapes.

1)

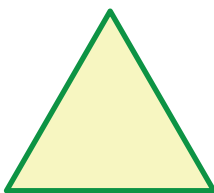


1


2)



3)




4)




5)




6)



7)



8)





SYMMETRY

Name _____

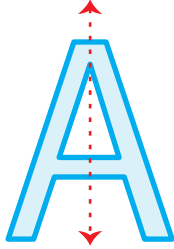
Score _____

Answer key

SY:08


Mention the number of all possible lines of symmetry for the following shapes.

1)



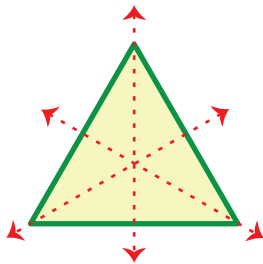
1

2)



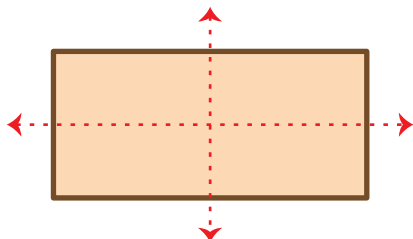
7

3)



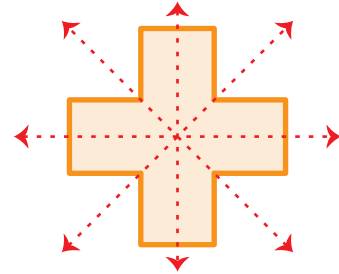
3

4)



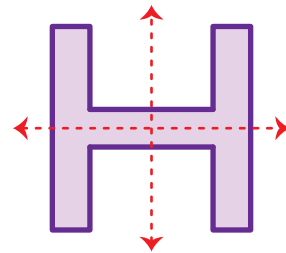
2

5)



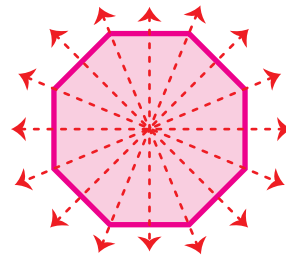
4

6)



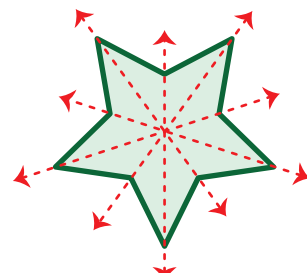
2

7)



8

8)



5
