



# SYMMETRY

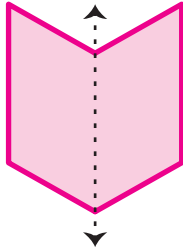
Name \_\_\_\_\_

Score \_\_\_\_\_

SY:03

State whether the following shapes are symmetrical along the dotted lines shown below.

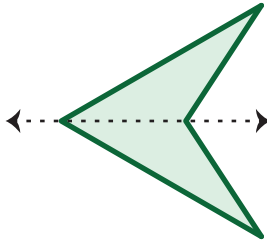
1)



Yes

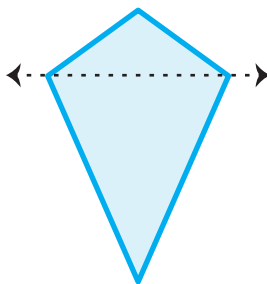
\_\_\_\_\_

2)



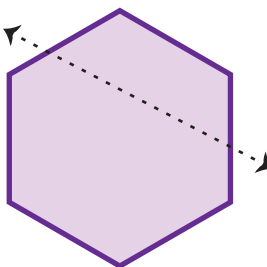
\_\_\_\_\_

3)



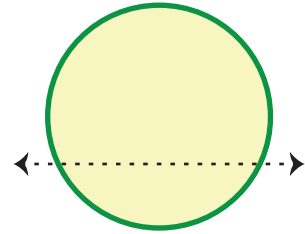
\_\_\_\_\_

4)



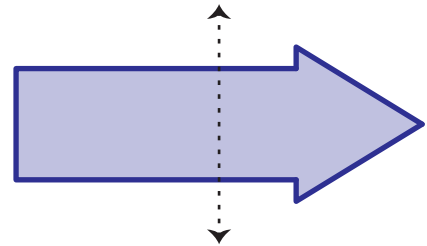
\_\_\_\_\_

5)



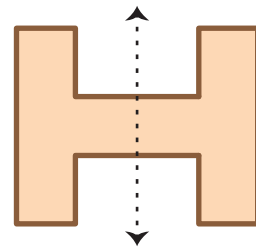
\_\_\_\_\_

6)



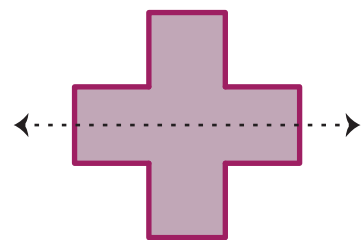
\_\_\_\_\_

7)



\_\_\_\_\_

8)



\_\_\_\_\_



# SYMMETRY

Name \_\_\_\_\_

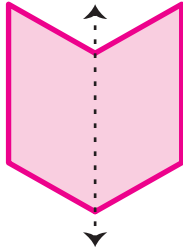
Score \_\_\_\_\_

## Answer key

SY:03

State whether the following shapes are symmetrical along the dotted lines shown below.

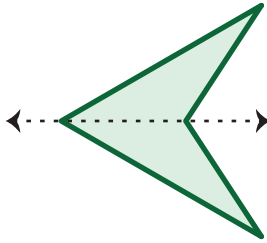
1)



Yes

---

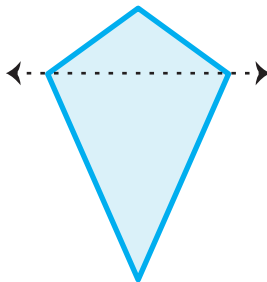
2)



Yes

---

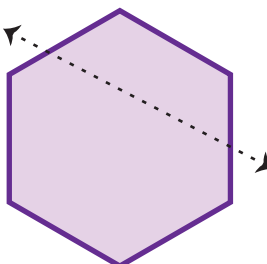
3)



No

---

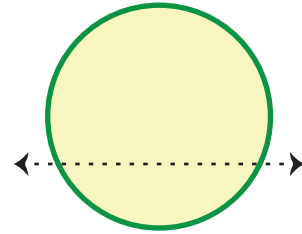
4)



No

---

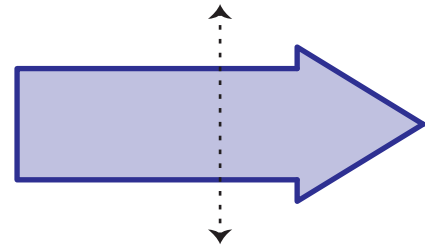
5)



No

---

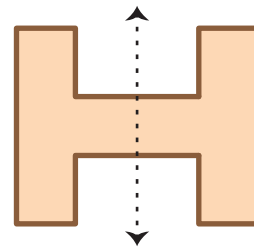
6)



No

---

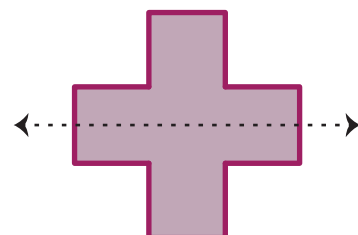
7)



Yes

---

8)



Yes

---