



Subtraction using Shapes

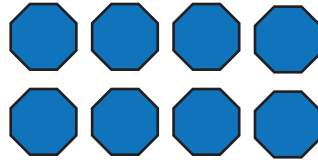
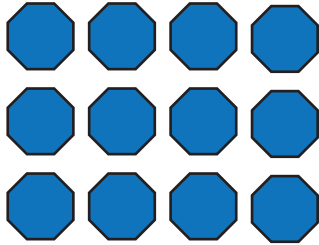
Name _____

Score _____

SS:III:13

Count the shapes, write the count on the boxes given below and subtract.

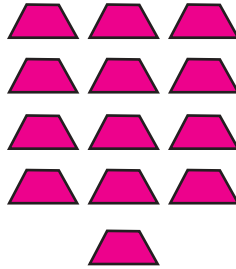

1)



-

=

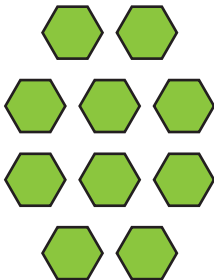
2)



-

=



3)



-

=

4)



-

=



Subtraction using Shapes

Name _____

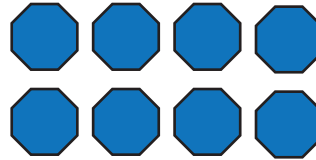
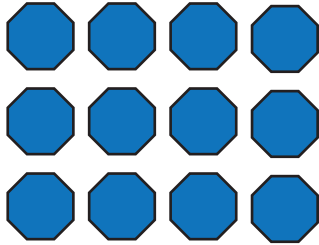
Score _____

Answer key

SS:III:13

Count the shapes, write the count on the boxes given below and subtract.

1)



12



-

8

=

4

2)



15

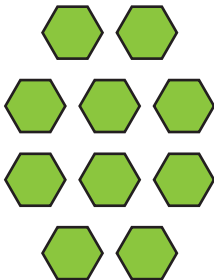
-

13

=

2

3)



10



-

2

=

8

4)



6

-

5

=

1