



Picture Subtraction

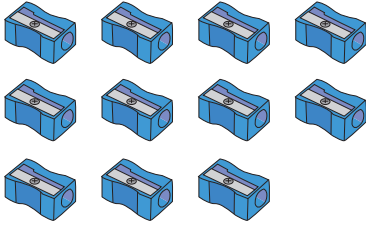
Name _____

Score _____

SS:III:06

Count the pictures to find the difference.

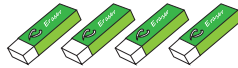
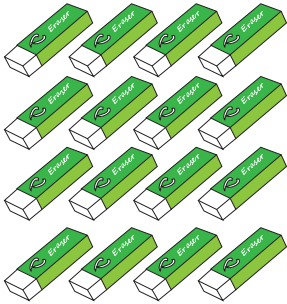
1)



-

=


2)



-

=


3)



-

=

4)



-

=



Picture Subtraction

Name _____

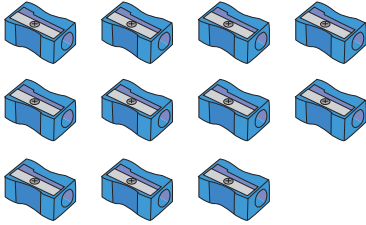
Score _____

Answer key

SS:III:06

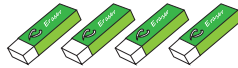
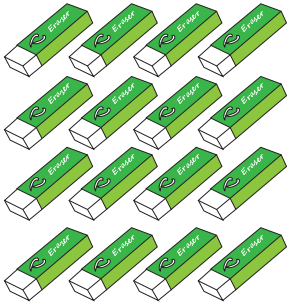
Count the pictures to find the difference.

1)




$$\boxed{11} - \boxed{1} = \boxed{10}$$

2)




$$\boxed{16} - \boxed{4} = \boxed{12}$$

3)



$$\boxed{20} - \boxed{16} = \boxed{4}$$

4)



$$\boxed{12} - \boxed{3} = \boxed{9}$$