



# FRACTIONS - NUMBER LINES

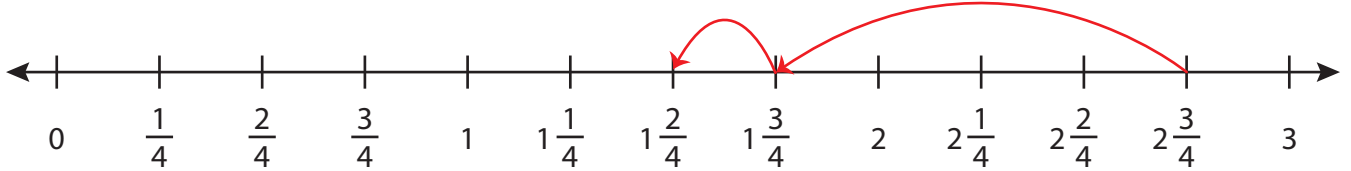
Name \_\_\_\_\_

Score \_\_\_\_\_

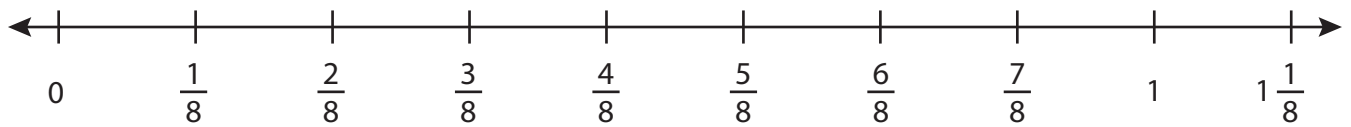
SS:33

Draw the hops.

1)  $2\frac{3}{4} - 1\frac{1}{4} =$                       $1\frac{2}{4}$                     



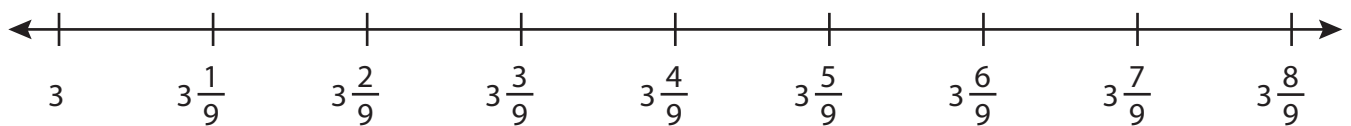
2)  $\frac{4}{8} - \frac{2}{8} =$                      



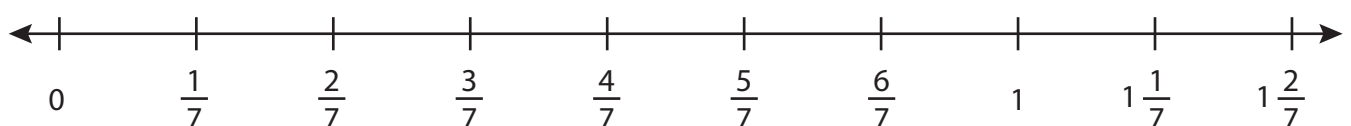
3)  $5\frac{2}{5} - \frac{2}{5} =$                      



4)  $3\frac{8}{9} - \frac{3}{9} =$                      



5)  $\frac{5}{7} - \frac{1}{7} =$                      





# FRACTIONS - NUMBER LINES

Name \_\_\_\_\_

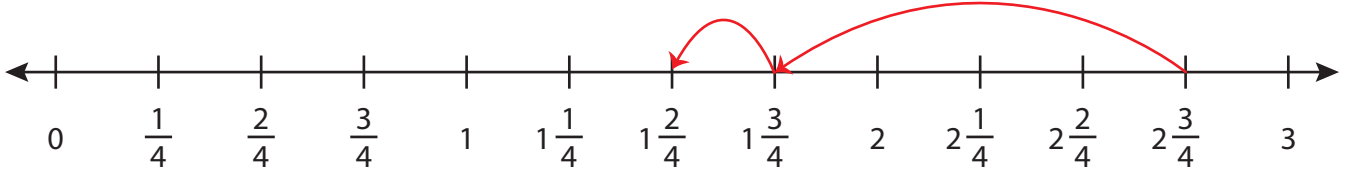
Score \_\_\_\_\_

## Answer key

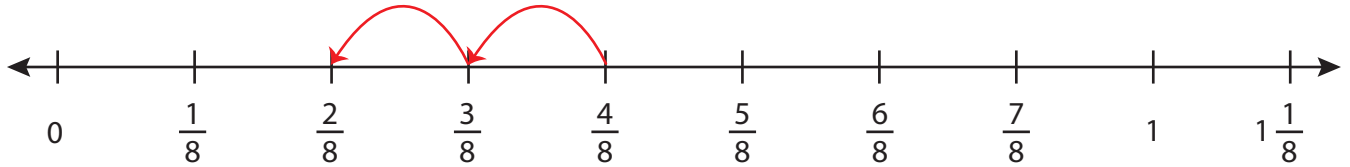
SS:33

Draw the hops.

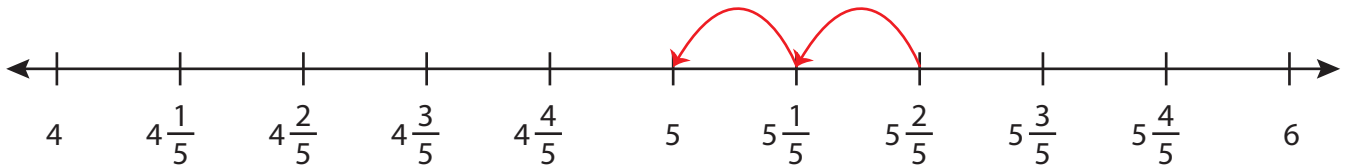
1)  $2\frac{3}{4} - 1\frac{1}{4} = \underline{1\frac{2}{4}}$



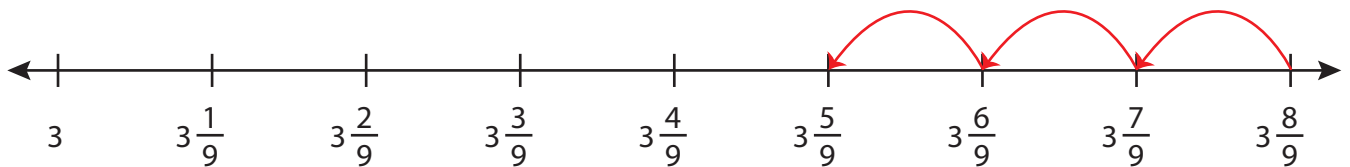
2)  $\frac{4}{8} - \frac{2}{8} = \underline{\frac{2}{8}}$



3)  $5\frac{2}{5} - \frac{2}{5} = \underline{5}$



4)  $3\frac{8}{9} - \frac{3}{9} = \underline{3\frac{5}{9}}$



5)  $\frac{5}{7} - \frac{1}{7} = \underline{\frac{4}{7}}$

