



FRACTIONS - NUMBER LINES

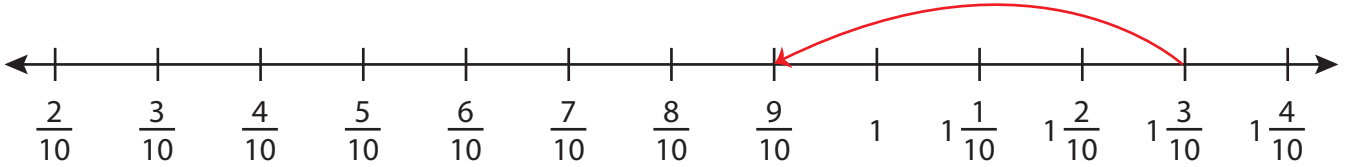
Name _____

Score _____

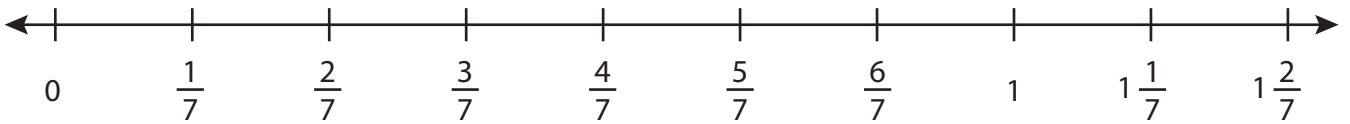
SS:32

Draw the hops.

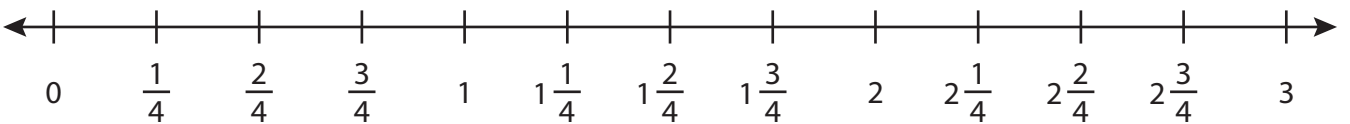
1) $1\frac{3}{10} - \frac{4}{10} =$ $\frac{9}{10}$



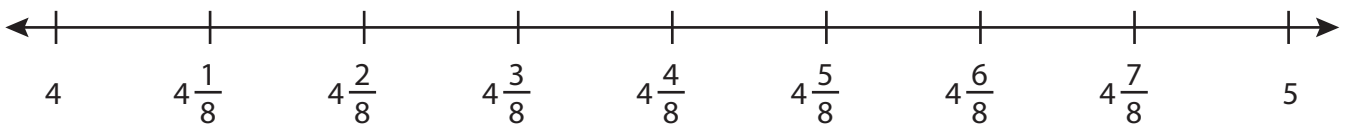
2) $\frac{3}{7} - \frac{1}{7} =$ _____



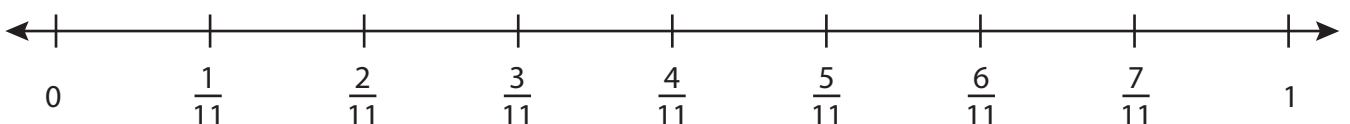
3) $2\frac{2}{4} - \frac{3}{4} =$ _____



4) $4\frac{7}{8} - \frac{5}{8} =$ _____



5) $\frac{7}{11} - \frac{2}{11} =$ _____





FRACTIONS - NUMBER LINES

Name _____

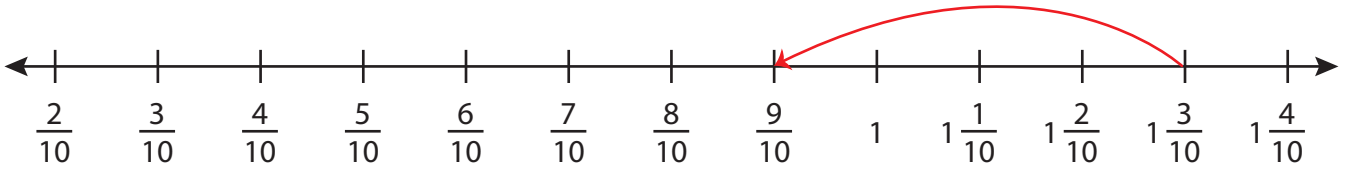
Score _____

Answer key

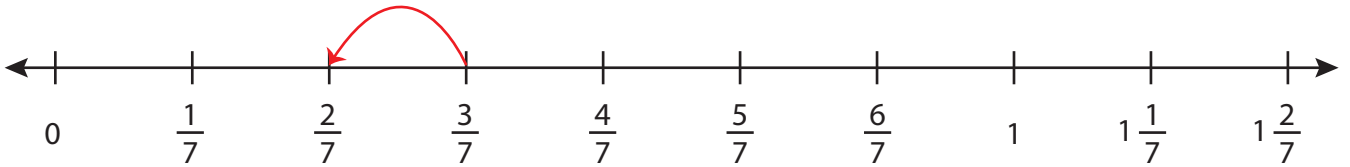
SS:32

Draw the hops.

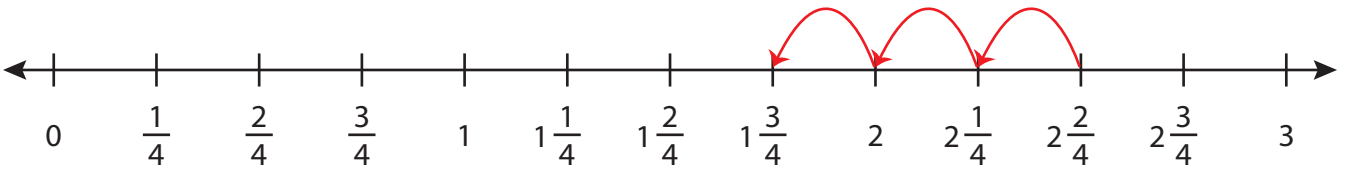
1) $1\frac{3}{10} - \frac{4}{10} = \underline{1\frac{9}{10}}$



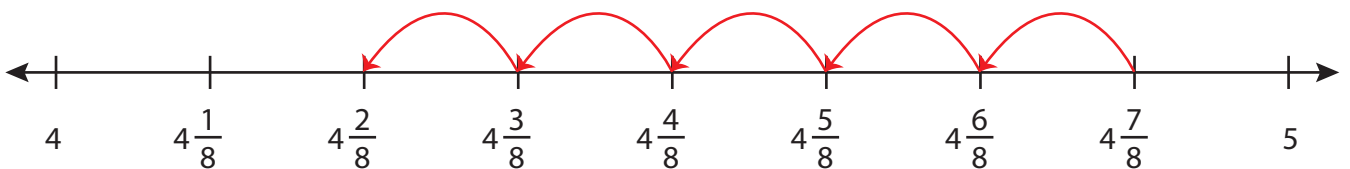
2) $\frac{3}{7} - \frac{1}{7} = \underline{\frac{2}{7}}$



3) $2\frac{2}{4} - \frac{3}{4} = \underline{1\frac{3}{4}}$



4) $4\frac{7}{8} - \frac{5}{8} = \underline{4\frac{2}{8}}$



5) $\frac{7}{11} - \frac{2}{11} = \underline{\frac{5}{11}}$

