



# FRACTIONS - NUMBER LINES

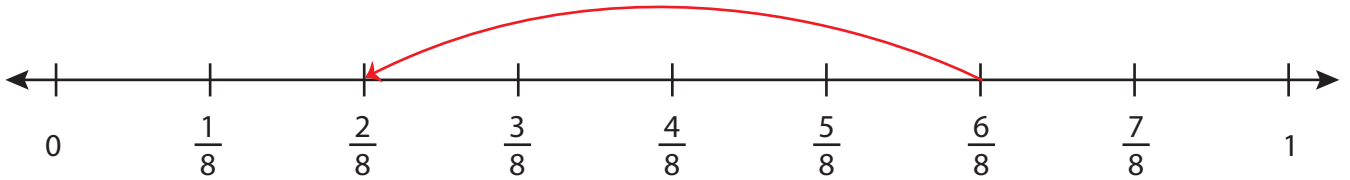
Name \_\_\_\_\_

Score \_\_\_\_\_

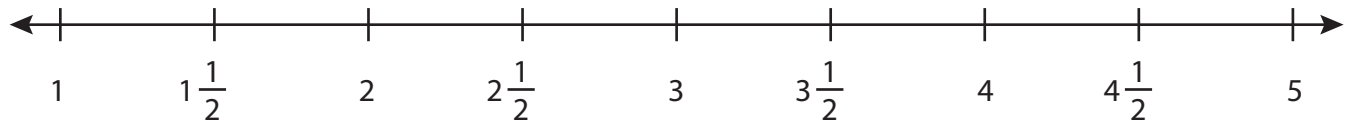
SS:31

Draw the hops.

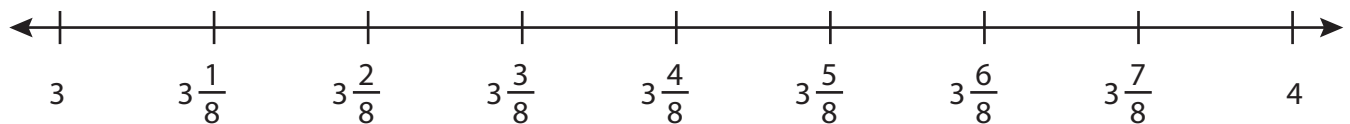
1)  $\frac{6}{8} - \frac{4}{8} = \underline{\frac{2}{8}}$



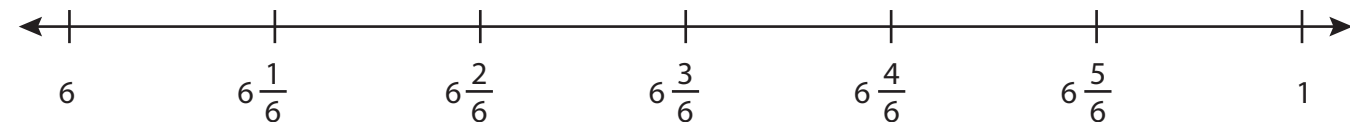
2)  $4 - 1\frac{1}{2} = \underline{\hspace{2cm}}$



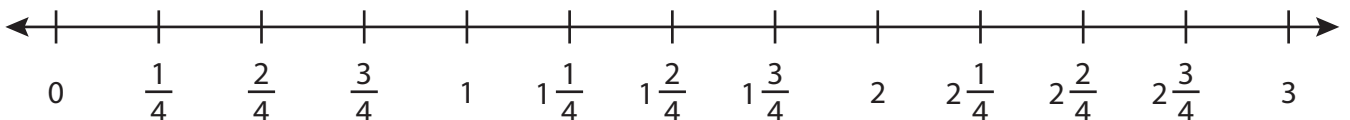
3)  $3\frac{5}{8} - \frac{3}{8} = \underline{\hspace{2cm}}$



4)  $6\frac{3}{6} - \frac{3}{6} = \underline{\hspace{2cm}}$



5)  $2 - \frac{1}{4} = \underline{\hspace{2cm}}$





# FRACTIONS - NUMBER LINES

Name \_\_\_\_\_

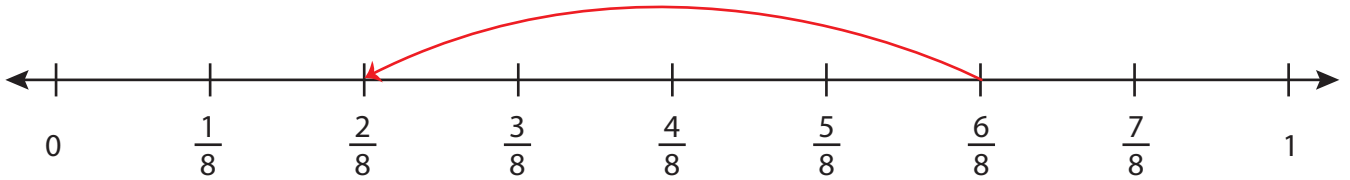
Score \_\_\_\_\_

## Answer key

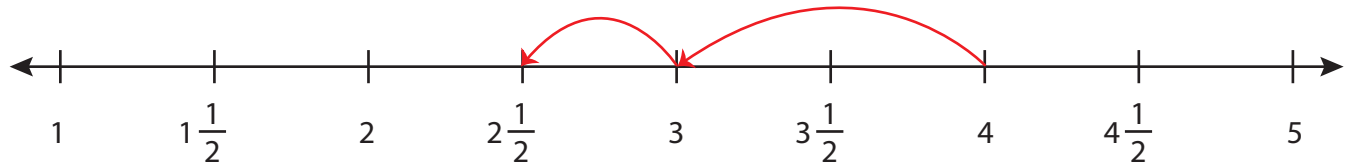
SS:31

Draw the hops.

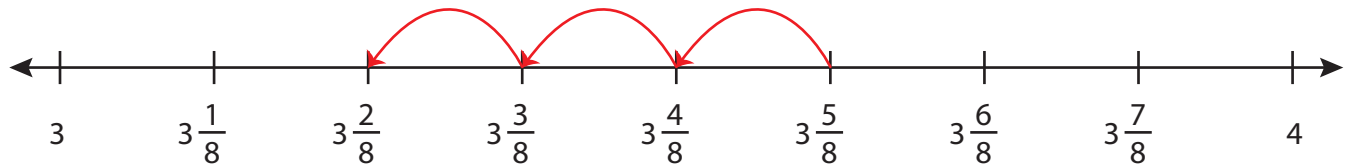
1)  $\frac{6}{8} - \frac{4}{8} = \underline{\frac{2}{8}}$



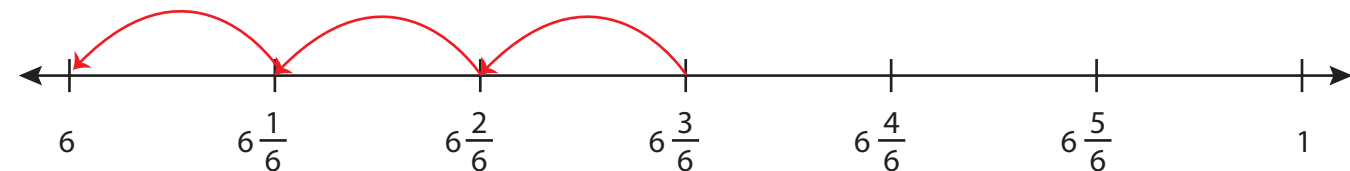
2)  $4 - 1\frac{1}{2} = \underline{2\frac{1}{2}}$



3)  $3\frac{5}{8} - \frac{3}{8} = \underline{3\frac{2}{8}}$



4)  $6\frac{3}{6} - \frac{3}{6} = \underline{6}$



5)  $2 - \frac{1}{4} = \underline{1\frac{3}{4}}$

