




# SUBTRACTING FRACTIONS


Name \_\_\_\_\_


Score \_\_\_\_\_


SS:18


Subtract the following fractions.


1)  $\frac{33}{8} - \frac{9}{8} =$  


7)  $3\frac{1}{6} - \frac{7}{6} =$  


2)  $1\frac{10}{11} - 1\frac{7}{11} =$  


8)  $\frac{35}{36} - \frac{19}{36} =$  


3)  $\frac{60}{25} - 2\frac{8}{25} =$  


9)  $5\frac{1}{18} - \frac{17}{18} =$  


4)  $\frac{3}{4} - \frac{1}{4} =$  

10)  $8\frac{1}{2} - \frac{1}{2} =$  

5)  $6\frac{6}{7} - 3\frac{5}{7} =$  

11)  $\frac{9}{5} - \frac{2}{5} =$  

6)  $\frac{24}{15} - \frac{18}{15} =$  

12)  $\frac{25}{20} - \frac{9}{20} =$  



# SUBTRACTING FRACTIONS


Name \_\_\_\_\_


Score \_\_\_\_\_


## Answer key


SS:18


Subtract the following fractions.


1)  $\frac{33}{8} - \frac{9}{8} =$  


7)  $3\frac{1}{6} - \frac{7}{6} =$  


2)  $1\frac{10}{11} - 1\frac{7}{11} =$  


8)  $\frac{35}{36} - \frac{19}{36} =$  


3)  $\frac{60}{25} - 2\frac{8}{25} =$  


9)  $5\frac{1}{18} - \frac{17}{18} =$  

4)  $\frac{3}{4} - \frac{1}{4} =$  

10)  $8\frac{1}{2} - \frac{1}{2} =$  

5)  $6\frac{6}{7} - 3\frac{5}{7} =$  

11)  $\frac{9}{5} - \frac{2}{5} =$  

6)  $\frac{24}{15} - \frac{18}{15} =$  

12)  $\frac{25}{20} - \frac{9}{20} =$  