



Types of Slopes

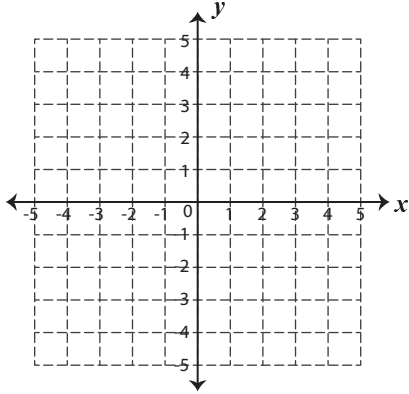
Name _____

Score _____

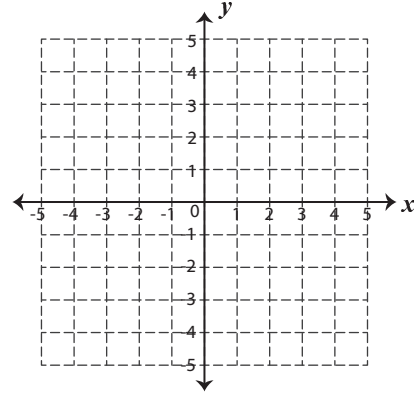
SL:06

Draw a line for the given points and identify the types of slopes.

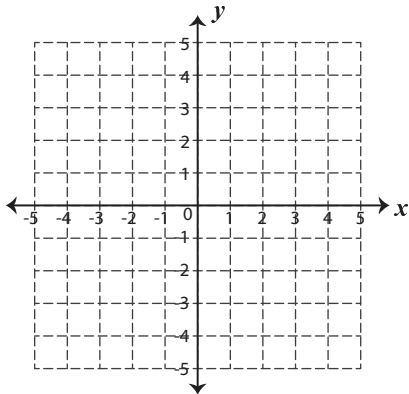
1) $(5, -4)$ and $(1, 0)$



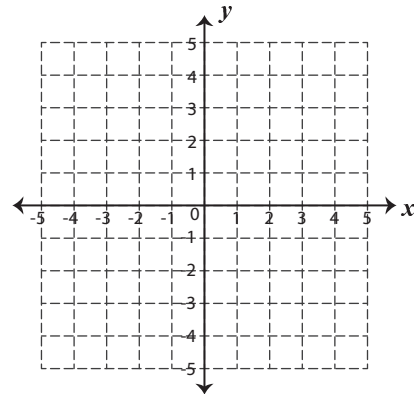
2) $(-2, 3)$ and $(-5, -2)$



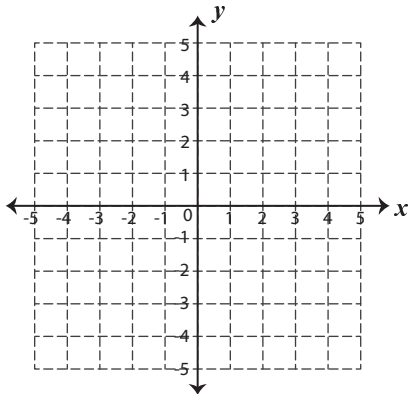
3) $(-5, -4)$ and $(4, -4)$



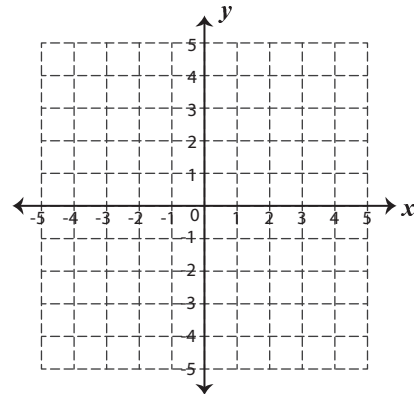
4) $(-1, 3)$ and $(1, -1)$



5) $(-3, -4)$ and $(0, 0)$



6) $(1, 5)$ and $(1, -5)$





Types of Slopes

Name _____

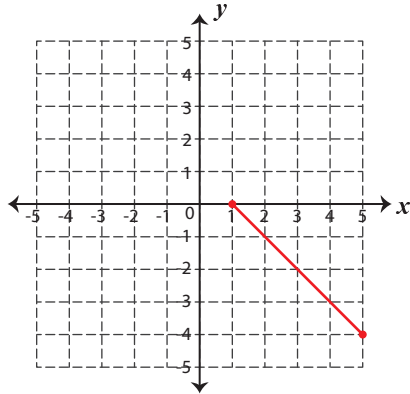
Score _____

Answer key

SL:06

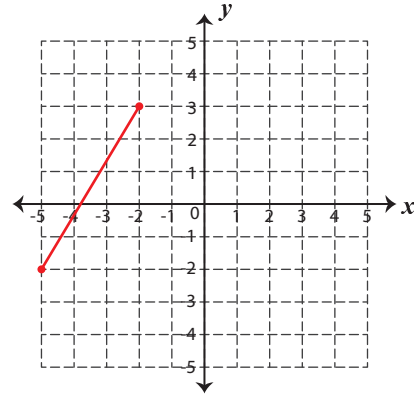
Draw a line for the given points and identify the types of slopes.

1) $(5, -4)$ and $(1, 0)$



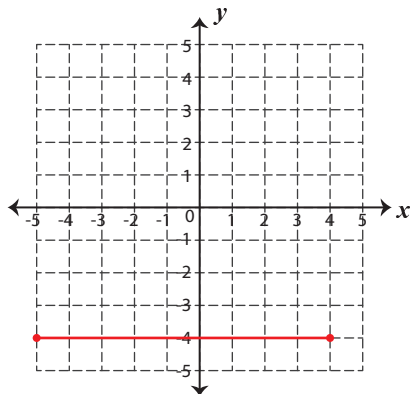
Negative

2) $(-2, 3)$ and $(-5, -2)$



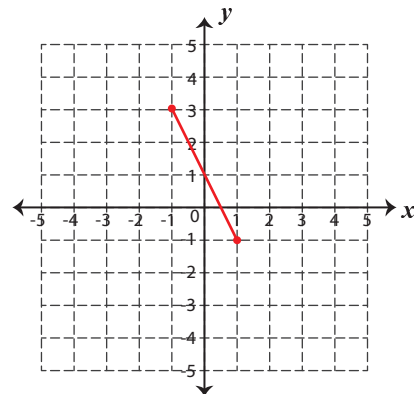
Positive

3) $(-5, -4)$ and $(4, -4)$



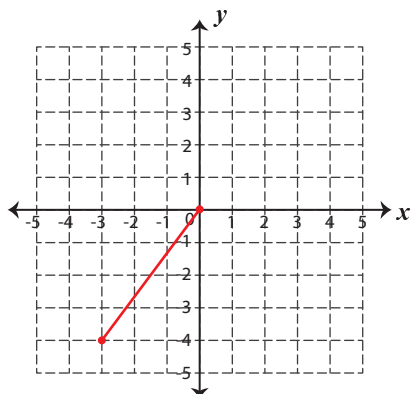
Zero

4) $(-1, 3)$ and $(1, -1)$



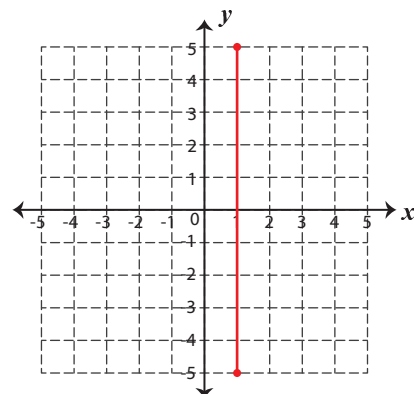
Negative

5) $(-3, -4)$ and $(0, 0)$



Positive

6) $(1, 5)$ and $(1, -5)$



Undefined