



Types of Slopes

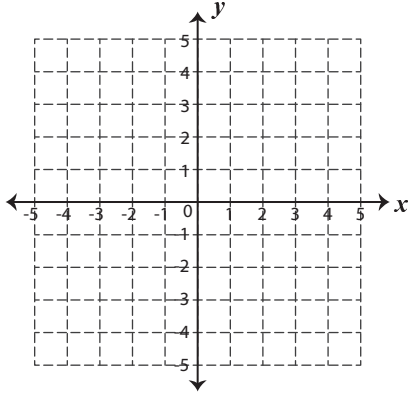
Name _____

Score _____

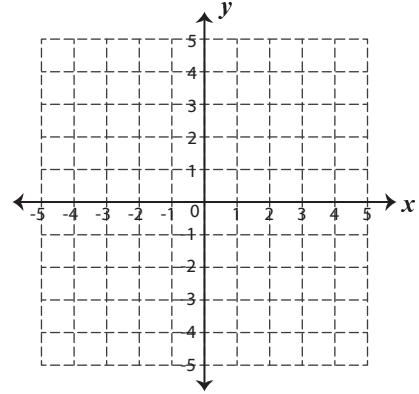
SL:05

Draw a line for the given points and identify the types of slopes.

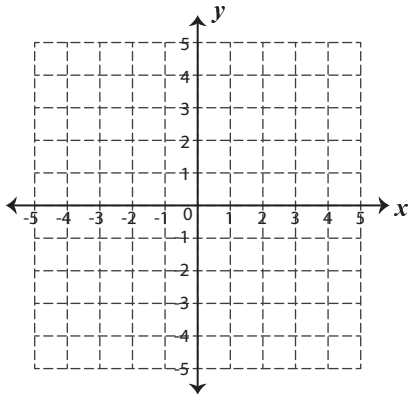
1) $(-3, -1)$ and $(3, -1)$



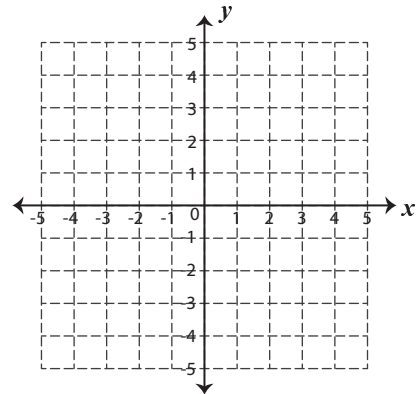
2) $(-4, 4)$ and $(2, -3)$



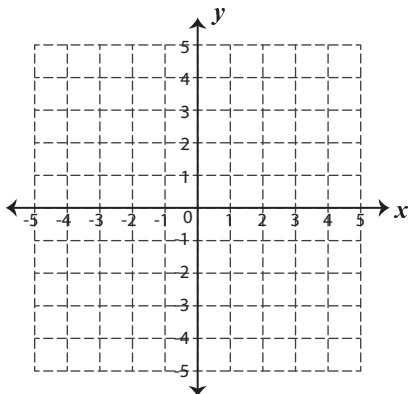
3) $(1, 1)$ and $(-5, -5)$



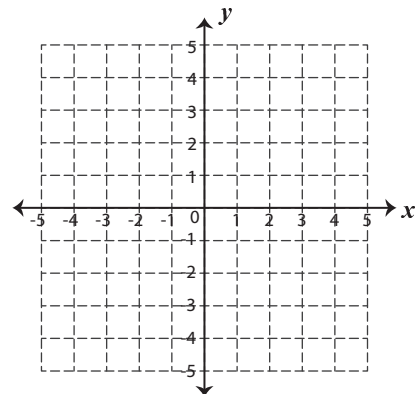
4) $(2, -5)$ and $(4, -1)$



5) $(-3, -3)$ and $(-3, 5)$



6) $(-3, 4)$ and $(1, -3)$





Types of Slopes

Name _____

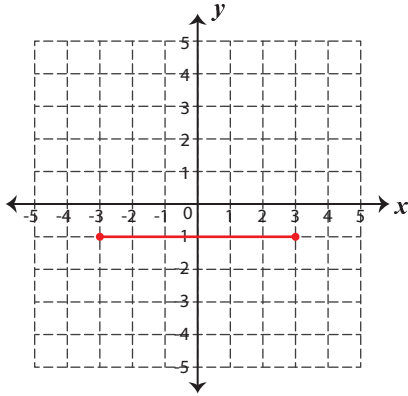
Score _____

Answer key

SL:05

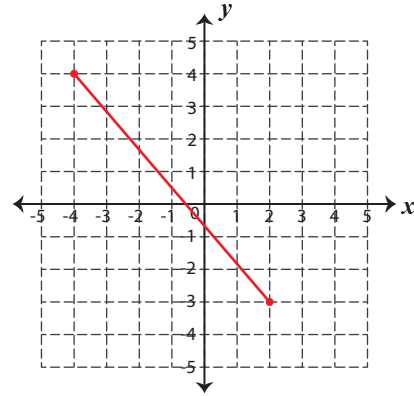
Draw a line for the given points and identify the types of slopes.

1) $(-3, -1)$ and $(3, -1)$



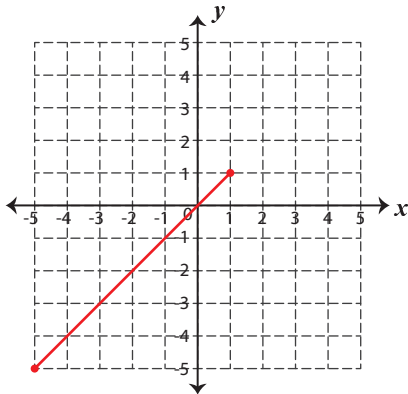
Zero

2) $(-4, 4)$ and $(2, -3)$



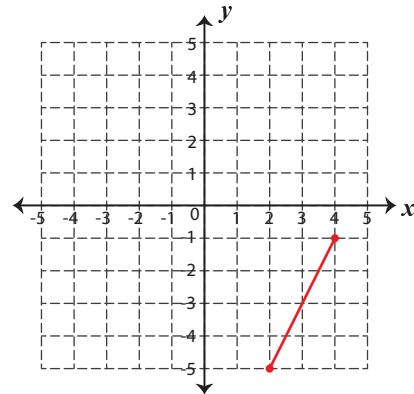
Negative

3) $(1, 1)$ and $(-5, -5)$



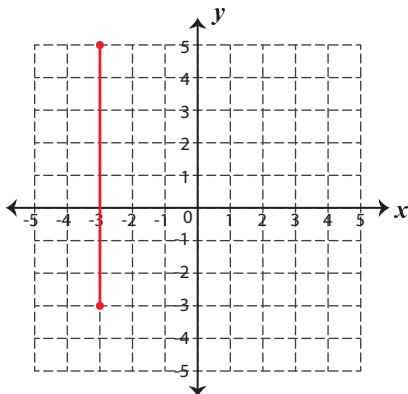
Positive

4) $(2, -5)$ and $(4, -1)$



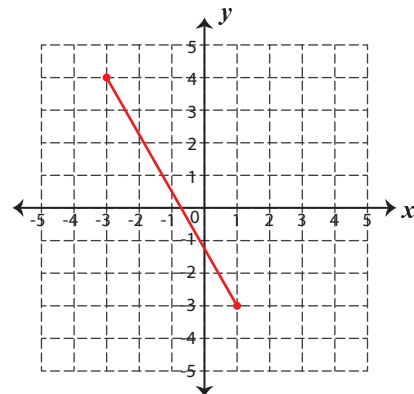
Positive

5) $(-3, -3)$ and $(-3, 5)$



Undefined

6) $(-3, 4)$ and $(1, -3)$



Negative