



Types of Slopes

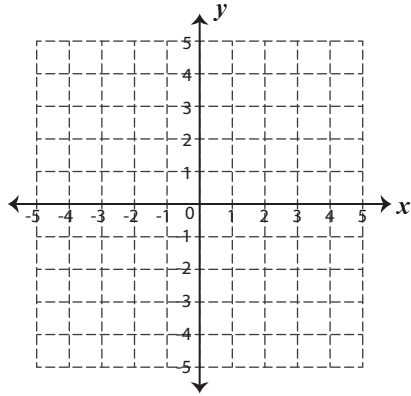
Name _____

Score _____

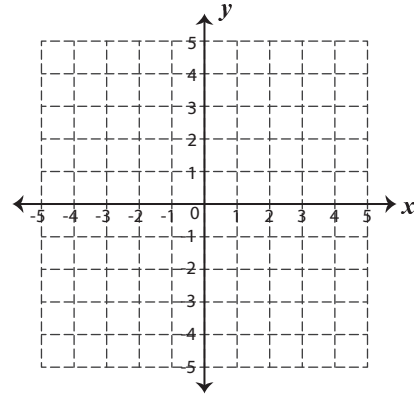
SL:04

Draw a line for the given points and identify the types of slopes.

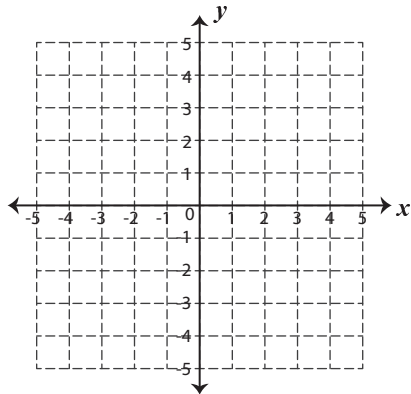
- 1) $(2, 2)$ and $(-1, -1)$



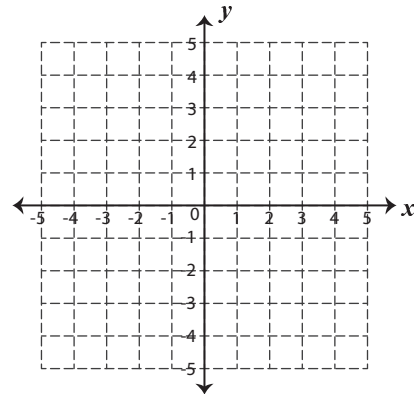
- 2) $(3, 3)$ and $(3, -4)$



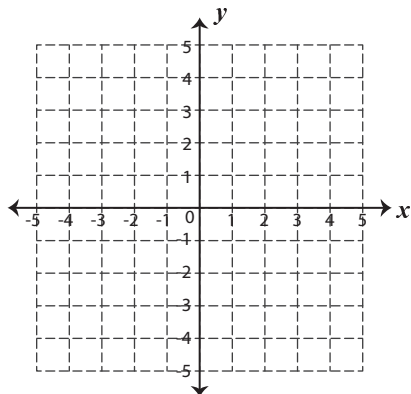
- 3) $(-4, -1)$ and $(1, -5)$



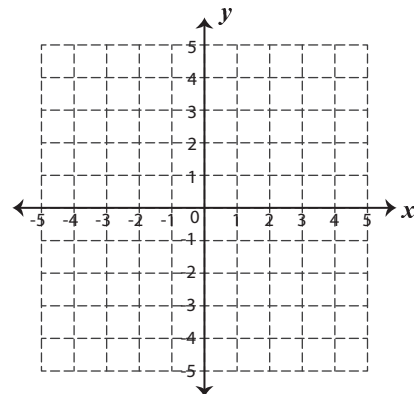
- 4) $(1, 5)$ and $(-4, 0)$



- 5) $(0, 4)$ and $(4, 0)$



- 6) $(5, 4)$ and $(-2, 4)$





Types of Slopes

Name _____

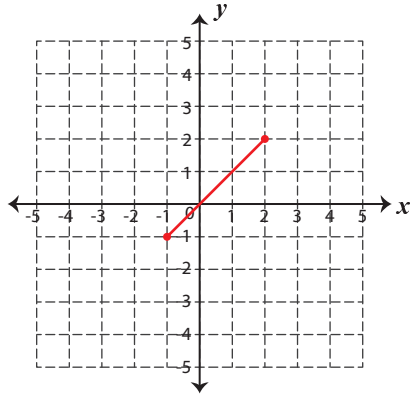
Score _____

Answer key

SL:04

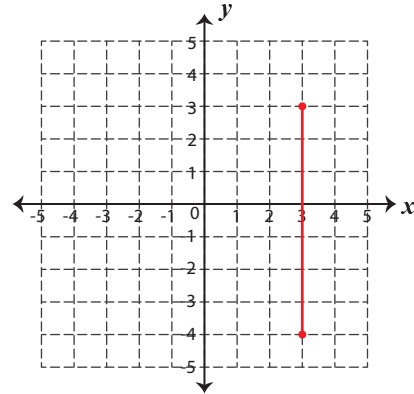
Draw a line for the given points and identify the types of slopes.

- 1) $(2, 2)$ and $(-1, -1)$



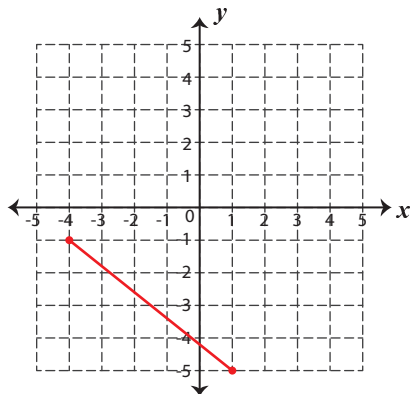
Positive

- 2) $(3, 3)$ and $(3, -4)$



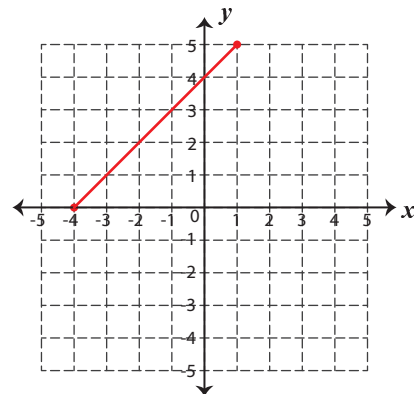
Undefined

- 3) $(-4, -1)$ and $(1, -5)$



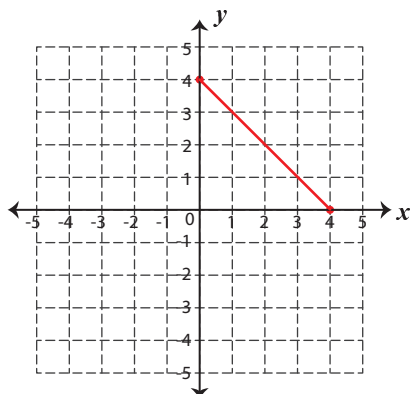
Negative

- 4) $(1, 5)$ and $(-4, 0)$



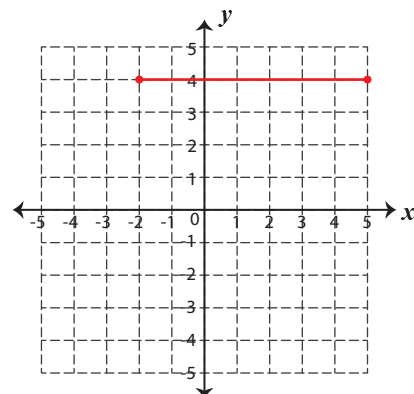
Positive

- 5) $(0, 4)$ and $(4, 0)$



Negative

- 6) $(5, 4)$ and $(-2, 4)$



Zero