



Name _____

Skip Counting by 10

Score _____


SCS:35

Fill in the missing numbers.

1)




2)




3)



4)



5)



6)



7)





Name _____

Skip Counting by 10

Score _____

Answer key

SCS:35

Fill in the missing numbers.

1)

| | | | | | | |
|----|----|-----------|-----------|-----------|-----------|-----------|
| 20 | 30 | 40 | 50 | 60 | 70 | 80 |
|----|----|-----------|-----------|-----------|-----------|-----------|

2)

| | | | | | | |
|----|----|-----------|-----------|------------|------------|------------|
| 60 | 70 | 80 | 90 | 100 | 110 | 120 |
|----|----|-----------|-----------|------------|------------|------------|

3)

| | | | | | | |
|-----|-----|------------|------------|------------|------------|------------|
| 100 | 110 | 120 | 130 | 140 | 150 | 160 |
|-----|-----|------------|------------|------------|------------|------------|

4)

| | | | | | | |
|-----|-----|------------|------------|------------|------------|------------|
| 140 | 150 | 160 | 170 | 180 | 190 | 200 |
|-----|-----|------------|------------|------------|------------|------------|

5)

| | | | | | | |
|----|----|-----------|-----------|-----------|------------|------------|
| 50 | 60 | 70 | 80 | 90 | 100 | 110 |
|----|----|-----------|-----------|-----------|------------|------------|

6)

| | | | | | | |
|-----|-----|------------|------------|------------|------------|------------|
| 150 | 160 | 170 | 180 | 190 | 200 | 210 |
|-----|-----|------------|------------|------------|------------|------------|

7)

| | | | | | | |
|----|----|-----------|------------|------------|------------|------------|
| 70 | 80 | 90 | 100 | 110 | 120 | 130 |
|----|----|-----------|------------|------------|------------|------------|