



# Over and Under


Name \_\_\_\_\_

Score \_\_\_\_\_

PW:22

Observe the position of the ball in each picture and choose the correct option.

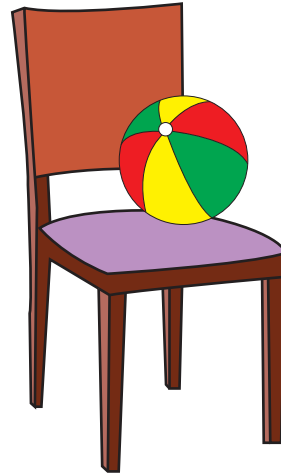
1)



Over

Under

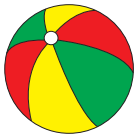
2)



Over

Under

3)



Over

Under

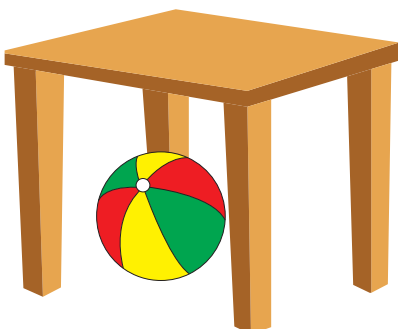
4)



Over

Under

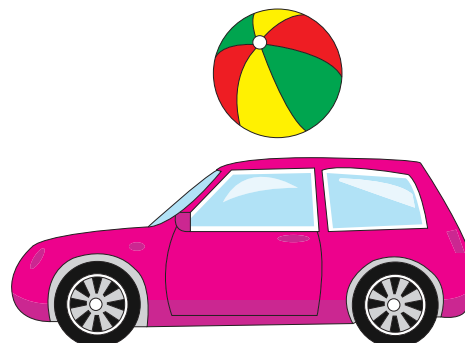
5)



Over

Under

6)



Over

Under



# Over and Under

Name \_\_\_\_\_


Score \_\_\_\_\_

## Answer key

PW:22

Observe the position of the ball in each picture and choose the correct option.

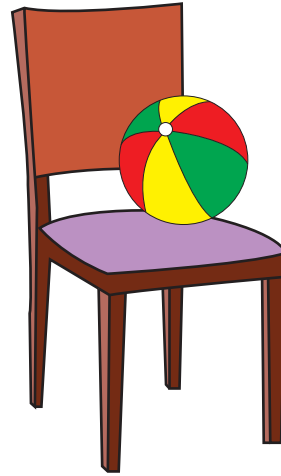
1)



Over

Under

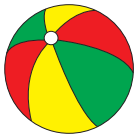
2)



Over

Under

3)



Over

Under

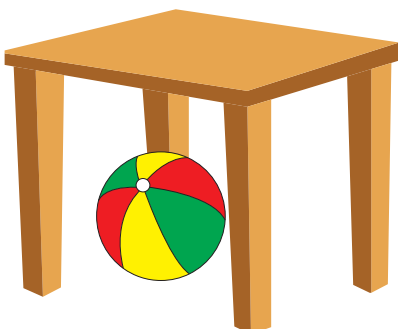
4)



Over

Under


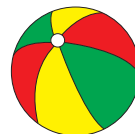
5)



Over

Under

6)



Over

Under