





Top, Middle and Bottom

Name _____

Score _____

PW:15

1) Circle the bottom object.





2) Circle the top object.




3) Circle the middle object.





4) Circle the top object.



5) Circle the middle object.



6) Circle the bottom object.





Top, Middle and Bottom



Name _____

Score _____

Answer key

PW:15

1) Circle the bottom object.





2) Circle the top object.




3) Circle the middle object.



4) Circle the top object.



5) Circle the middle object.



6) Circle the bottom object.

