



ABACUS

Name _____

Score _____

PV:V:29

Count the number of beads shown in each abacus and record them.

Also write the number in words.

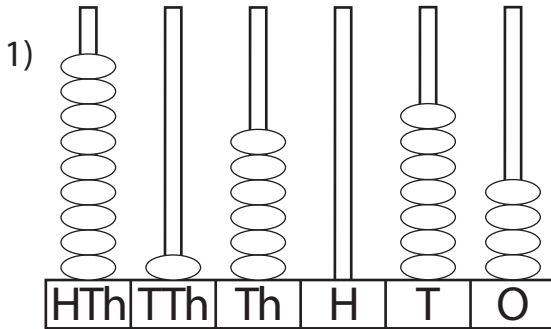


Figure : _____

Words : _____

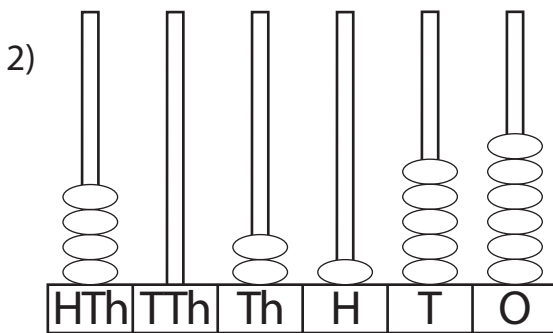


Figure : _____

Words : _____

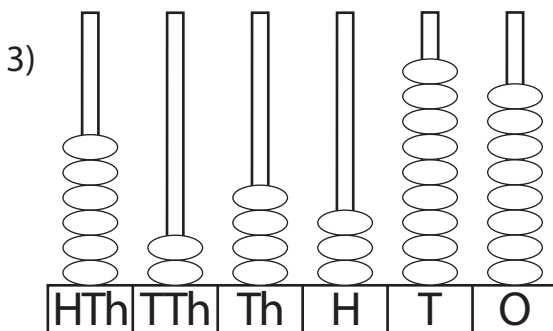


Figure : _____

Words : _____

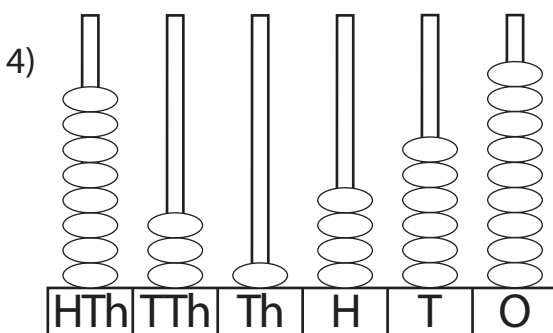


Figure : _____

Words : _____

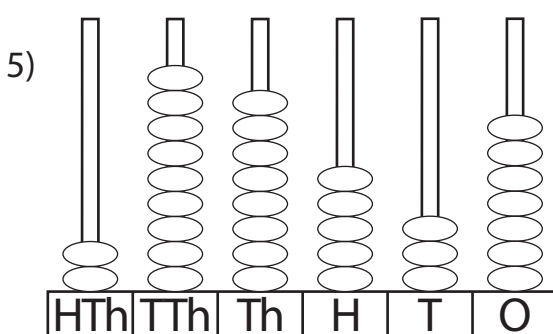


Figure : _____

Words : _____



ABACUS

Answer key

Name _____

Score _____

PV:V:29

Count the number of beads shown in each abacus and record them.
Also write the number in words.

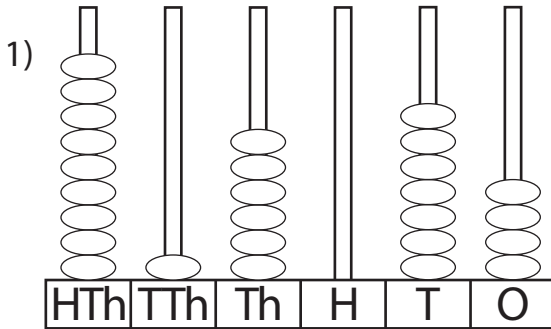


Figure : 916,074

Words : Nine hundred sixteen thousand
seventy-four.

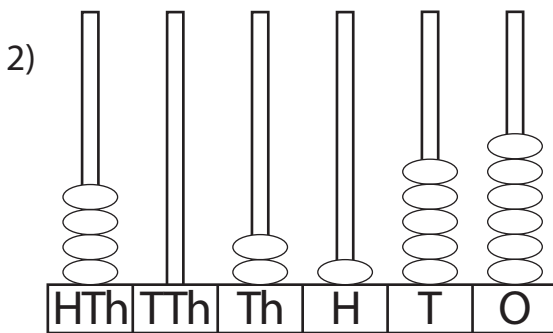


Figure : 402,156

Words : Four hundred two thousand
one hundred fifty-six.

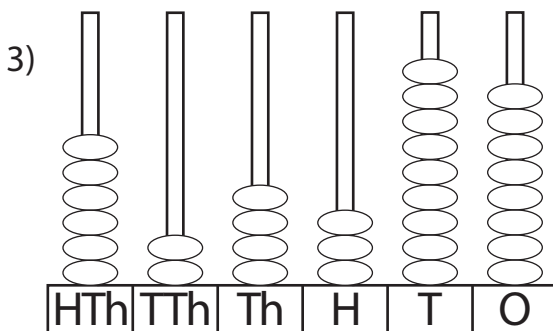


Figure : 624,398

Words : Six hundred twenty four thousand
three hundred ninety-eight.

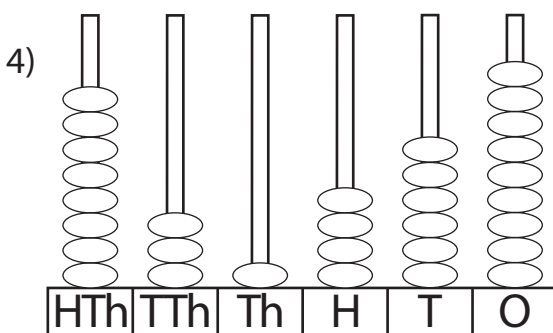


Figure : 831,469

Words : Eight hundred thirty one thousand
four hundred sixty-nine.

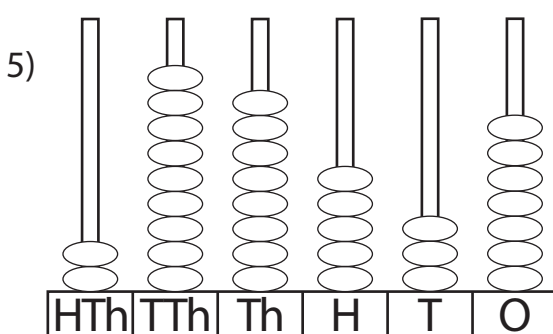


Figure : 298,537

Words : Two hundred ninety eight thousand
five hundred thirty-seven.