



# ABACUS

Name \_\_\_\_\_

Score \_\_\_\_\_

PV:V:28

Count the number of beads shown in each abacus and record them.  
Also write the number in words.

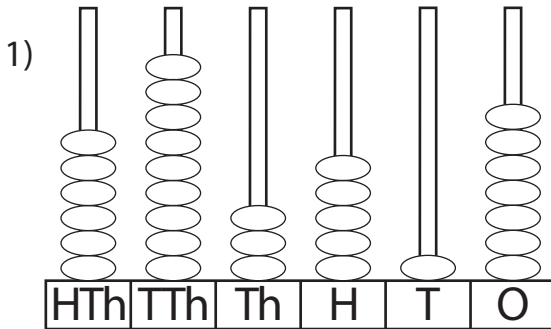


Figure : \_\_\_\_\_

Words : \_\_\_\_\_

\_\_\_\_\_

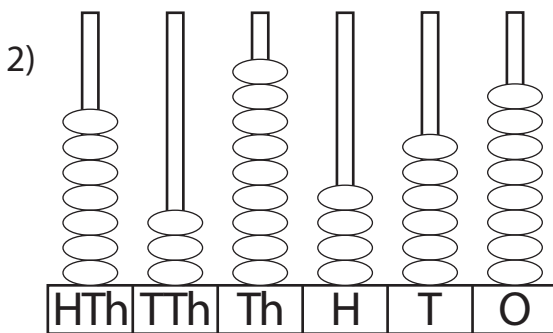


Figure : \_\_\_\_\_

Words : \_\_\_\_\_

\_\_\_\_\_

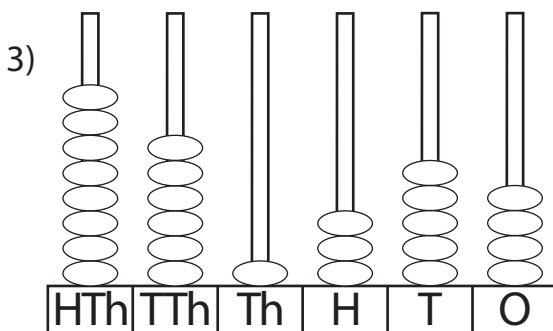


Figure : \_\_\_\_\_

Words : \_\_\_\_\_

\_\_\_\_\_

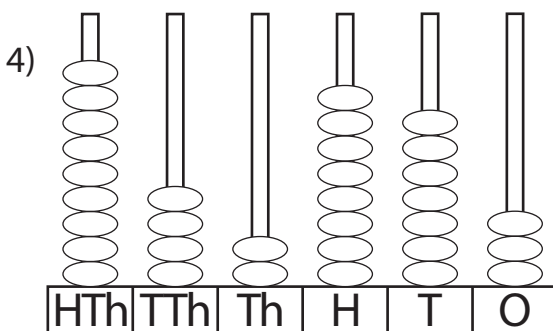


Figure : \_\_\_\_\_

Words : \_\_\_\_\_

\_\_\_\_\_

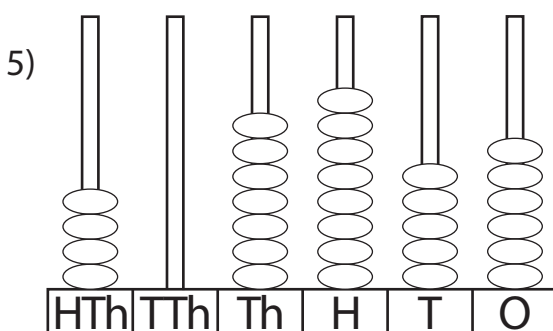


Figure : \_\_\_\_\_

Words : \_\_\_\_\_

\_\_\_\_\_



# ABACUS

## Answer key

Name \_\_\_\_\_

Score \_\_\_\_\_

PV:V:28

Count the number of beads shown in each abacus and record them.  
Also write the number in words.

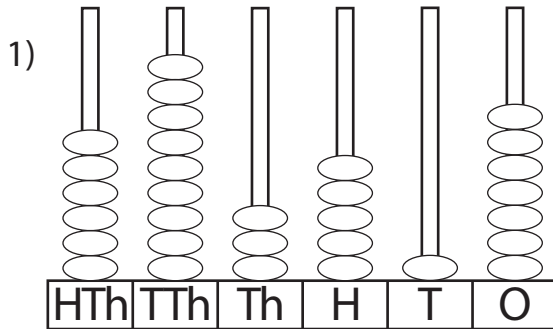


Figure : 693,517

Words : Six hundred ninety three thousand  
five hundred seventeen.

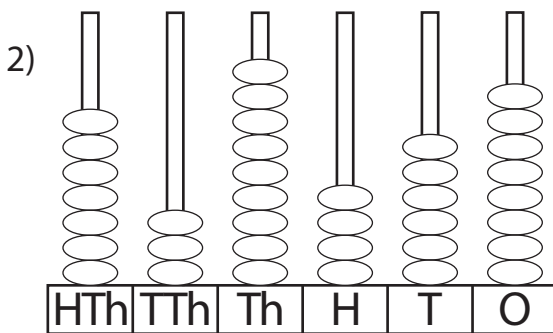


Figure : 739,468

Words : Seven hundred thirty nine thousand  
four hundred sixty-eight.

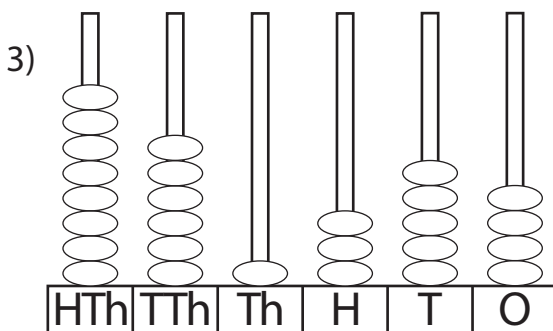


Figure : 861,354

Words : Eight hundred sixty one thousand  
three hundred fifty-four.

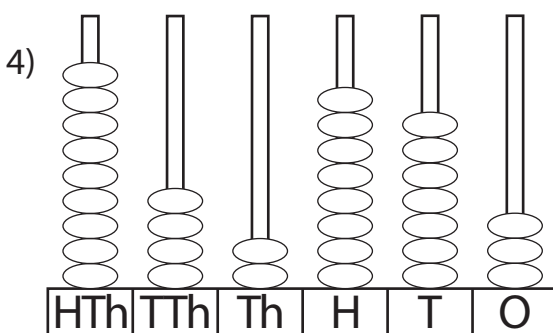


Figure : 942,873

Words : Nine hundred forty two thousand  
eight hundred seventy-three.

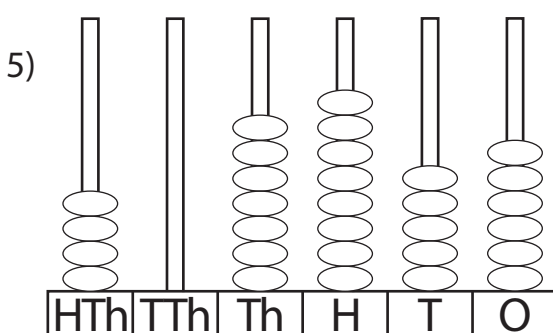


Figure : 407,856

Words : Four hundred seven thousand  
eight hundred fifty-six.