



PLACE VALUE-ABACUS

Name _____

Score _____

PV:II:41

Write the number shown on each abacus in figures and words.

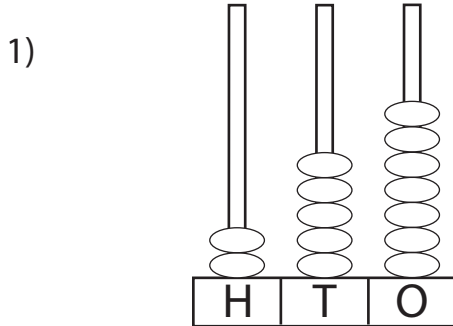


Figure : 257

Words : Two hundred fifty-seven

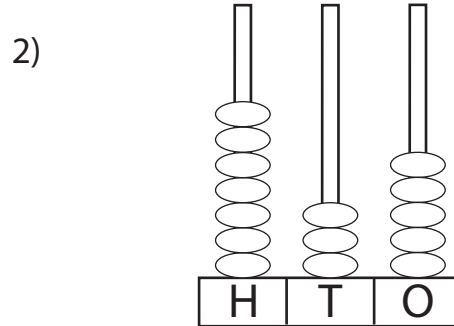


Figure : _____

Words : _____

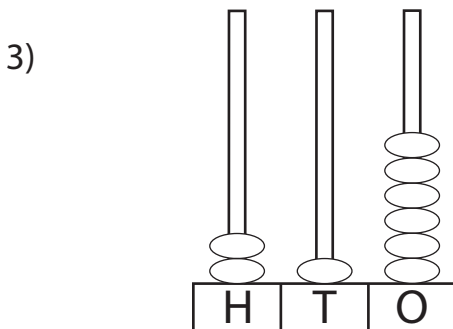


Figure : _____

Words : _____

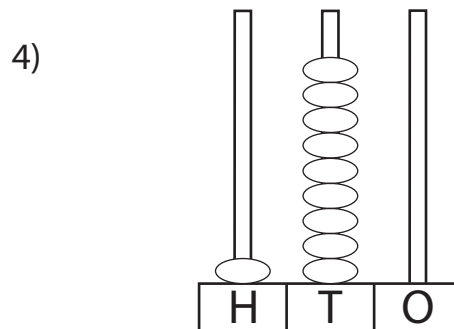


Figure : _____

Words : _____

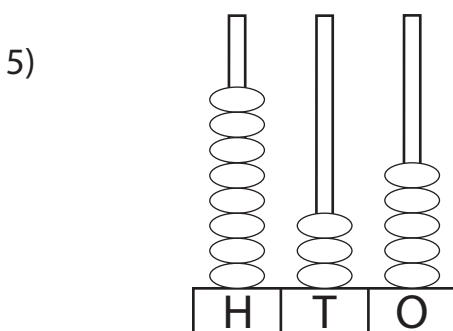


Figure : _____

Words : _____

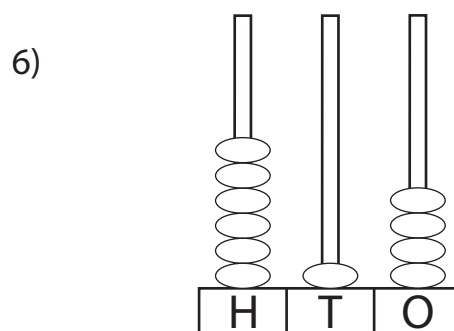


Figure : _____

Words : _____



PLACE VALUE-ABACUS

Name _____

Score _____

Answer key

PV:II:41

Write the number shown on each abacus in figures and words.

1)

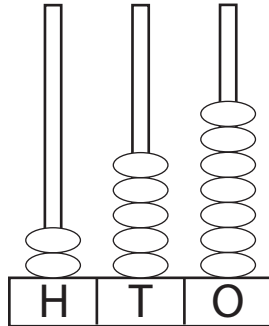


Figure : 257

Words : Two hundred fifty-seven

2)

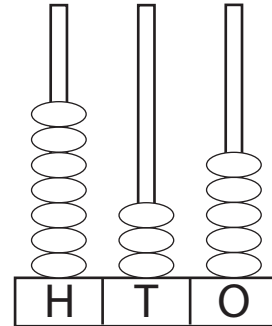


Figure : 735

Words : Seven hundred thirty-five

3)

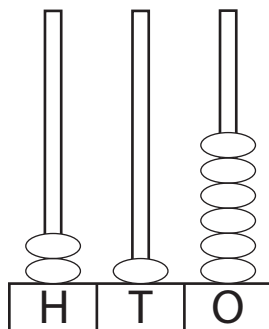


Figure : 216

Words : Two hundred sixteen

4)

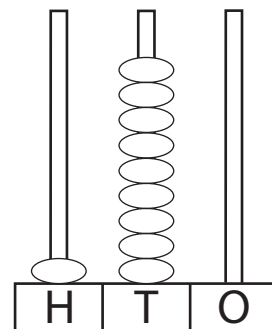


Figure : 190

Words : One hundred ninety

5)

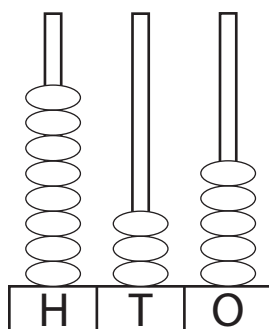


Figure : 835

Words : Eight hundred thirty-five

6)

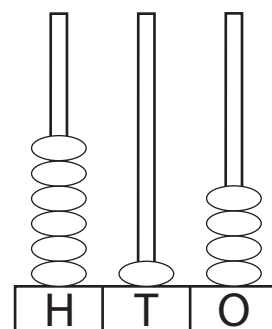


Figure : 614

Words : six hundred fourteen