



PLACE VALUE-ABACUS

Name _____

Score _____

PV:II:40

Write the number shown on each abacus in figures and words.

1)

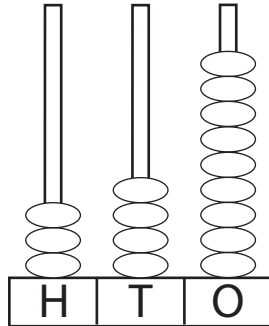


Figure : 349

Words : Three hundred forty-nine

2)

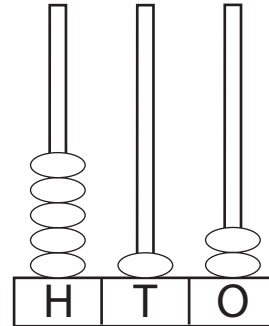


Figure : _____

Words : _____

3)

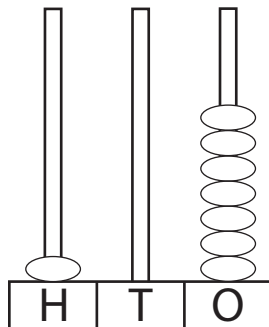


Figure : _____

Words : _____

4)

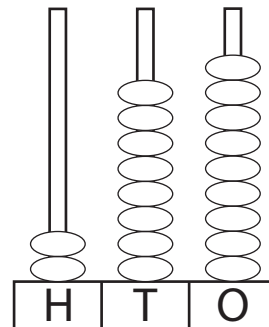


Figure : _____

Words : _____

5)

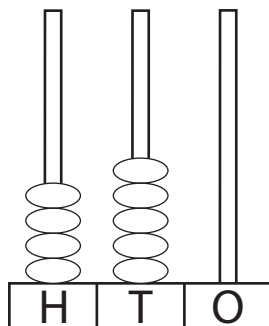


Figure : _____

Words : _____

6)

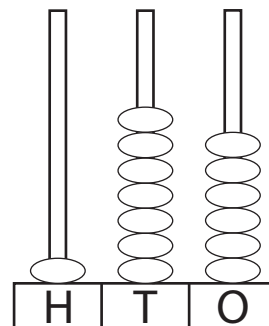


Figure : _____

Words : _____



PLACE VALUE-ABACUS

Name _____

Score _____

Answer key

PV:II:40

Write the number shown on each abacus in figures and words.

1)

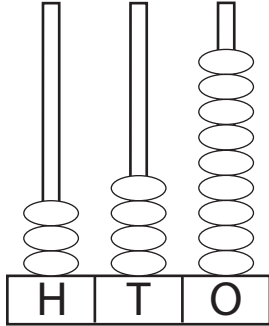


Figure : **349**

Words : **Three hundred forty-nine**

2)

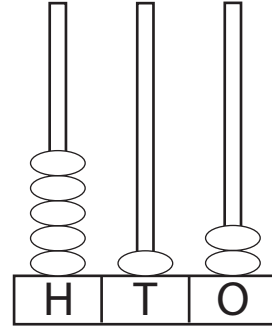


Figure : **512**

Words : **Five hundred twelve**

3)

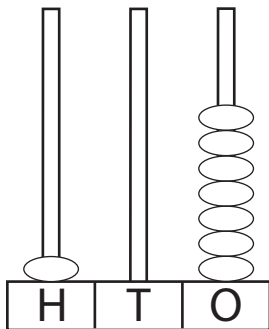


Figure : **107**

Words : **One hundred seven**

4)

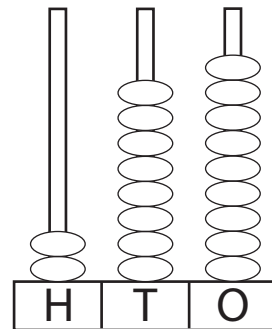


Figure : **289**

Words : **Two hundred eighty-nine**

5)

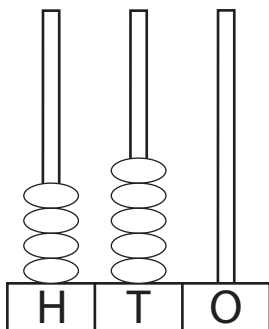


Figure : **450**

Words : **Four hundred fifty**

6)

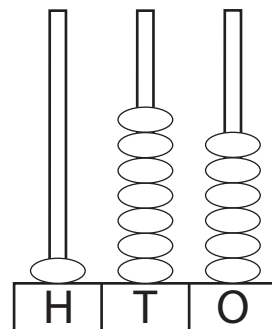


Figure : **176**

Words : **One hundred seventy-six**