



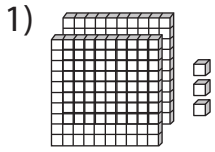
PLACE VALUE

Name _____

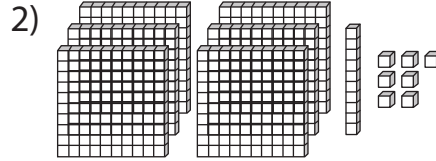
Score _____

PV:II:15

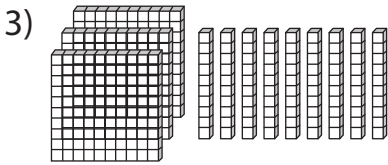
Count the blocks and write the corresponding place value.



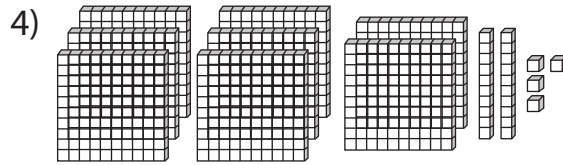
 2 0 3
Hundreds Tens Ones



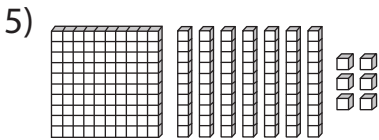
_____ _____ _____
Hundreds Tens Ones



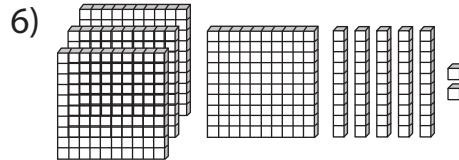
_____ _____ _____
Hundreds Tens Ones



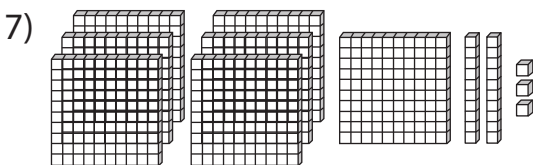
_____ _____ _____
Hundreds Tens Ones



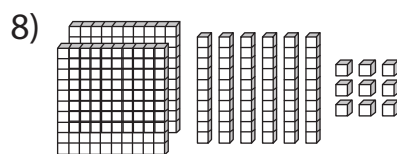
_____ _____ _____
Hundreds Tens Ones



_____ _____ _____
Hundreds Tens Ones



_____ _____ _____
Hundreds Tens Ones



_____ _____ _____
Hundreds Tens Ones



PLACE VALUE

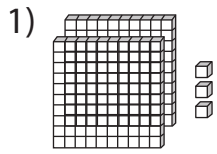
Name _____

Score _____

Answer key

PV:II:15

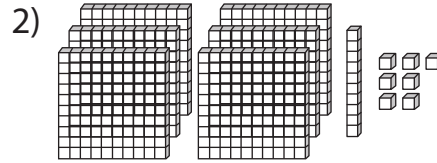
Count the blocks and write the corresponding place value.



2
Hundreds

0
Tens

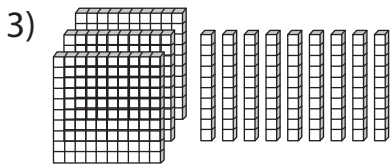
3
Ones



6
Hundreds

1
Tens

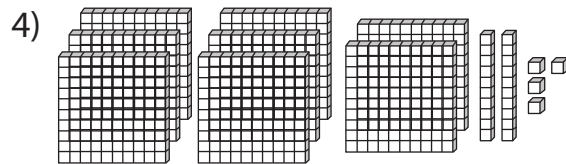
7
Ones



3
Hundreds

9
Tens

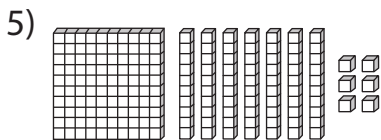
0
Ones



8
Hundreds

2
Tens

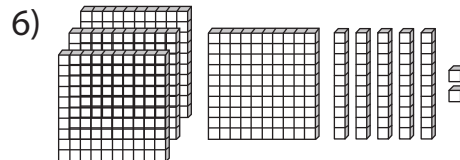
4
Ones



1
Hundreds

7
Tens

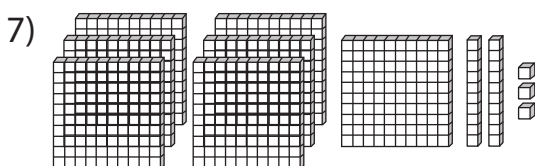
6
Ones



4
Hundreds

5
Tens

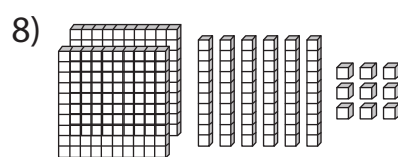
2
Ones



7
Hundreds

2
Tens

3
Ones



2
Hundreds

6
Tens

9
Ones