



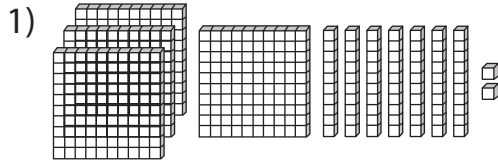
PLACE VALUE

Name _____

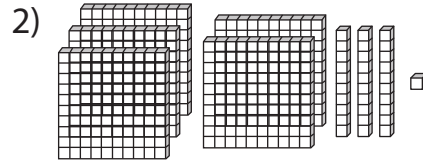
Score _____

PV:II:14

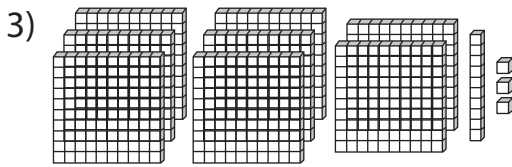
Count the blocks and write the corresponding place value.



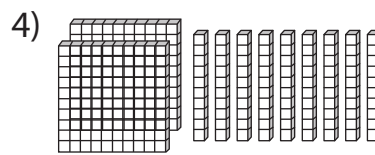
4 7 2
Hundreds Tens Ones



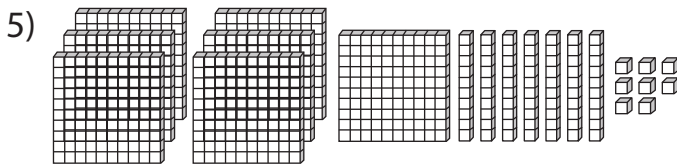
Hundreds Tens Ones



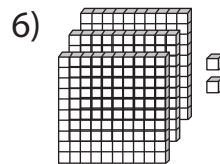
Hundreds Tens Ones



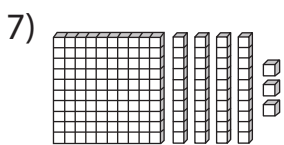
Hundreds Tens Ones



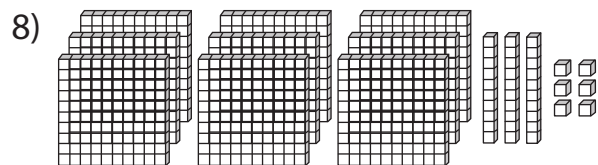
Hundreds Tens Ones



Hundreds Tens Ones



Hundreds Tens Ones



Hundreds Tens Ones



PLACE VALUE

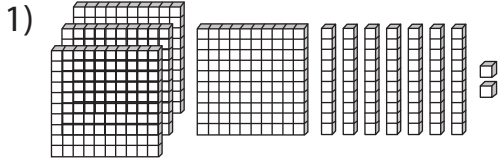
Name _____

Score _____

Answer key

PV:II:14

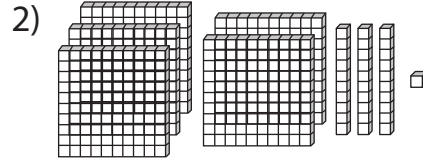
Count the blocks and write the corresponding place value.



4
Hundreds

7
Tens

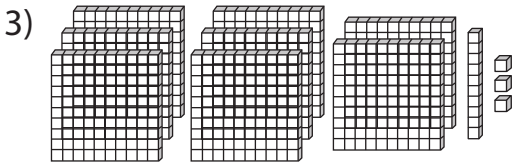
2
Ones



5
Hundreds

3
Tens

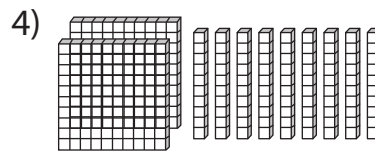
1
Ones



8
Hundreds

1
Tens

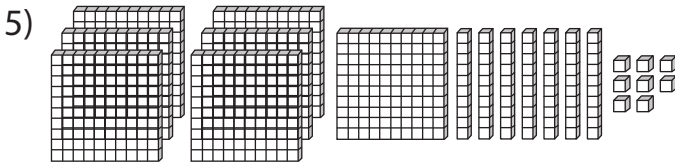
3
Ones



2
Hundreds

9
Tens

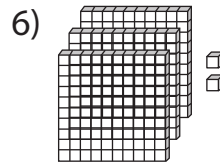
0
Ones



7
Hundreds

7
Tens

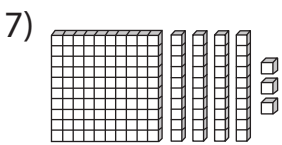
8
Ones



3
Hundreds

0
Tens

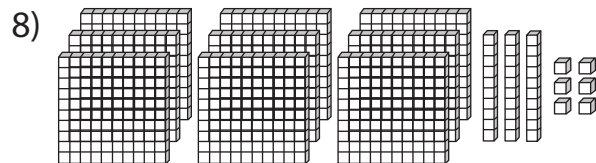
2
Ones



1
Hundreds

4
Tens

3
Ones



9
Hundreds

3
Tens

6
Ones