



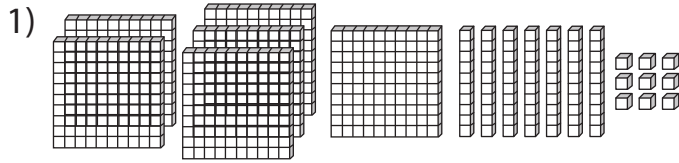
PLACE VALUE

Name _____

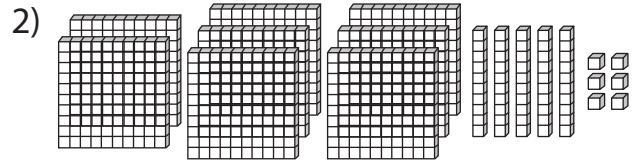
Score _____

PV:II:13

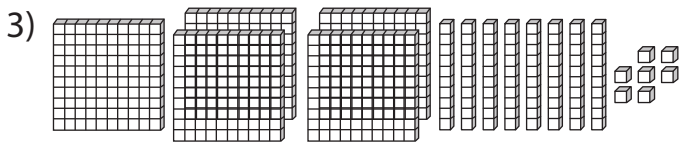
Count the blocks and write the corresponding place value.



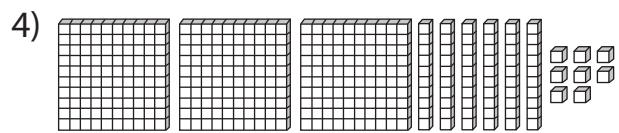
6
Hundreds 7
Tens 9
Ones



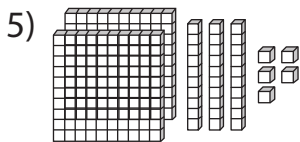
Hundreds _____
Tens _____
Ones



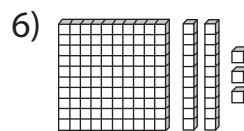
Hundreds _____
Tens _____
Ones



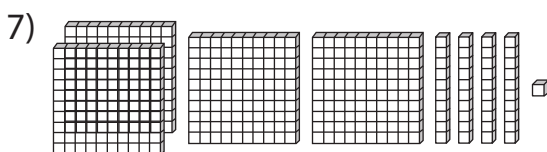
Hundreds _____
Tens _____
Ones



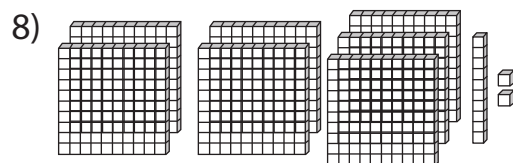
Hundreds _____
Tens _____
Ones



Hundreds _____
Tens _____
Ones



Hundreds _____
Tens _____
Ones



Hundreds _____
Tens _____
Ones



PLACE VALUE

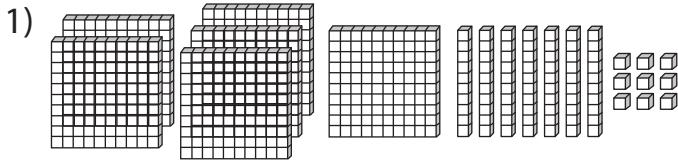
Name _____

Score _____

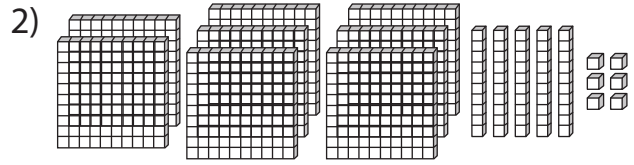
Answer key

PV:II:13

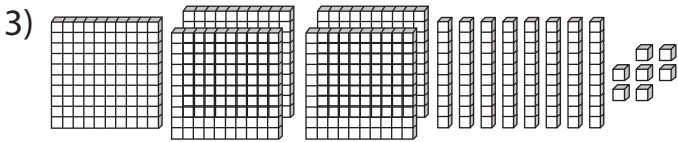
Count the blocks and write the corresponding place value.



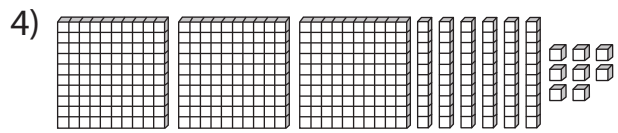
6
Hundreds 7
Tens 9
Ones



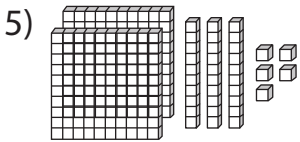
8
Hundreds 5
Tens 6
Ones



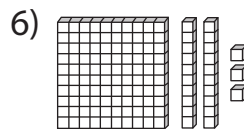
5
Hundreds 8
Tens 7
Ones



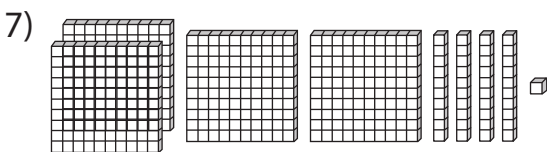
3
Hundreds 6
Tens 8
Ones



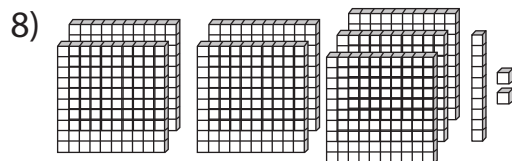
2
Hundreds 3
Tens 5
Ones



1
Hundreds 2
Tens 3
Ones



4
Hundreds 4
Tens 1
Ones



7
Hundreds 1
Tens 2
Ones