



PLACE VALUE-ABACUS

Name _____

Score _____

PV:I:42

Write the number shown on each abacus.

1)

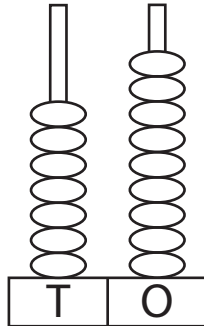


Figure : _____

Words : _____

2)

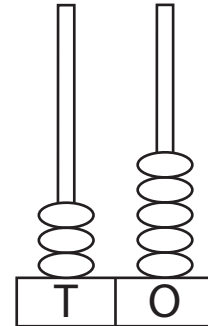


Figure : _____

Words : _____

3)

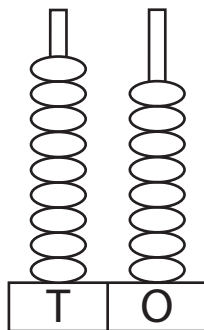


Figure : _____

Words : _____

4)

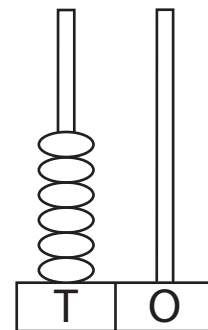


Figure : _____

Words : _____

5)

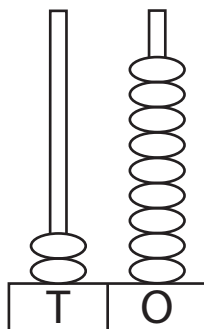


Figure : _____

Words : _____

6)

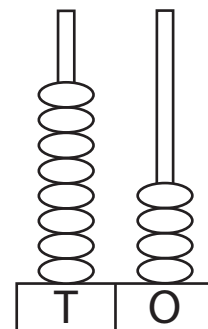


Figure : _____

Words : _____



PLACE VALUE-ABACUS

Name _____

Score _____

Answer key

PV:I:42

Write the number shown on each abacus.

1)

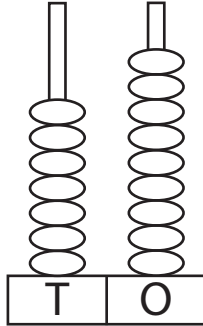


Figure : 79

Words : Seventy nine

2)

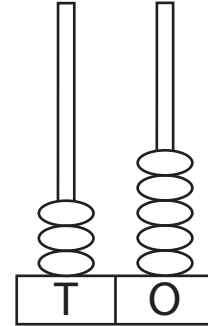


Figure : 35

Words : Thirty five

3)

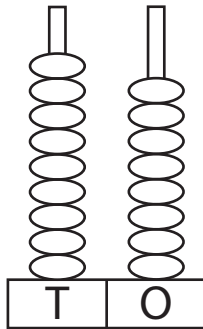


Figure : 98

Words : Ninety eight

4)

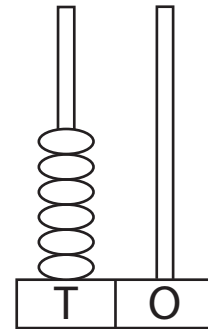


Figure : 60

Words : Sixty

5)

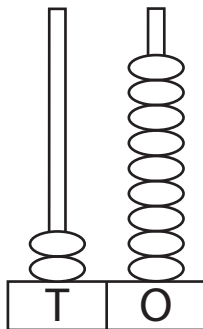


Figure : 29

Words : Twenty nine

6)

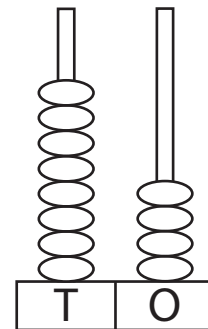


Figure : 84

Words : Eighty four