



# PLACE VALUE-ABACUS

Name \_\_\_\_\_

Score \_\_\_\_\_

PV:I:41

Write the number shown on each abacus.

1)

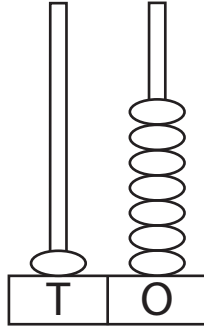


Figure : \_\_\_\_\_

Words : \_\_\_\_\_

2)

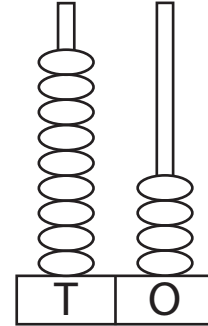


Figure : \_\_\_\_\_

Words : \_\_\_\_\_

3)

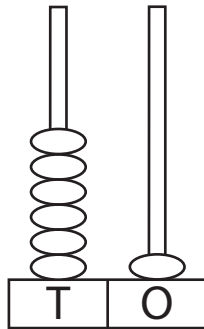


Figure : \_\_\_\_\_

Words : \_\_\_\_\_

4)

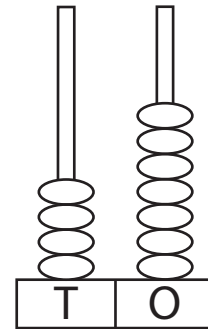


Figure : \_\_\_\_\_

Words : \_\_\_\_\_

5)

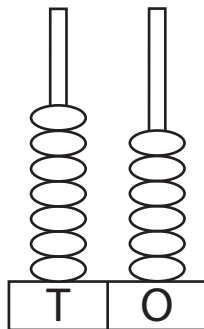


Figure : \_\_\_\_\_

Words : \_\_\_\_\_

6)

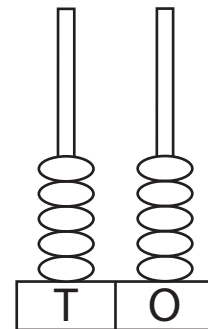


Figure : \_\_\_\_\_

Words : \_\_\_\_\_



# PLACE VALUE-ABACUS

Name \_\_\_\_\_

Score \_\_\_\_\_

## Answer key

PV:I:41

Write the number shown on each abacus.

1)

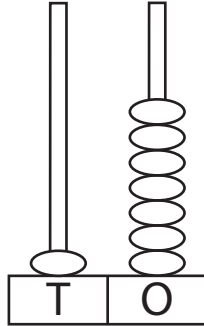


Figure : 17

Words : Seventeen

2)

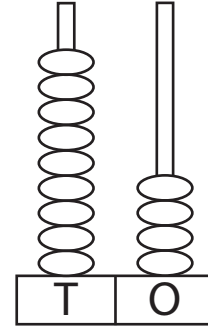


Figure : 94

Words : Ninety four

3)

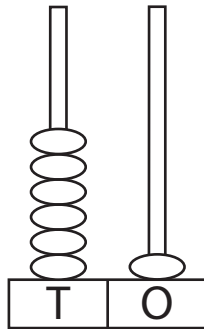


Figure : 61

Words : Sixty one

4)

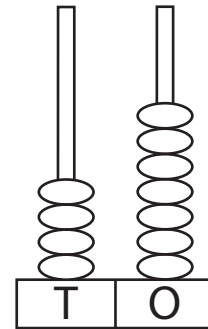


Figure : 47

Words : Forty seven

5)

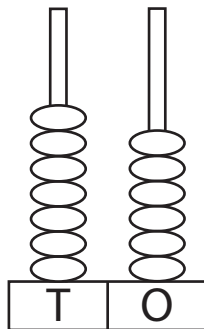


Figure : 76

Words : Seventy six

6)

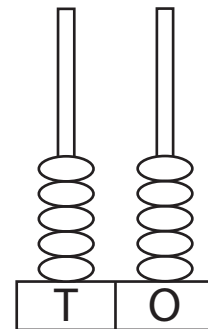


Figure : 55

Words : Fifty five