



PLACE VALUE-ABACUS

Name _____

Score _____

PV:I:40

Write the number shown on each abacus.

1)

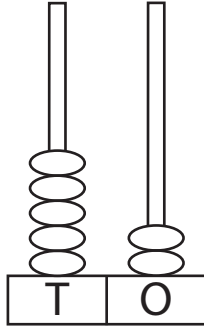


Figure : _____

Words : _____

2)

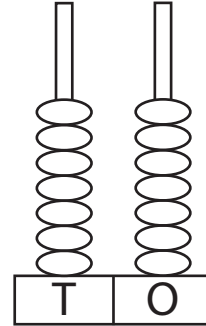


Figure : _____

Words : _____

3)

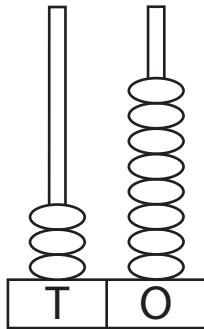


Figure : _____

Words : _____

4)

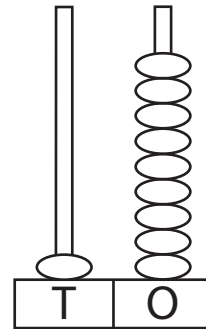


Figure : _____

Words : _____

5)

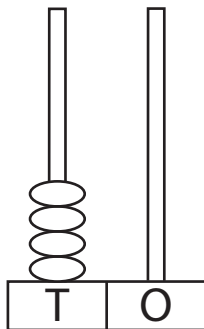


Figure : _____

Words : _____

6)

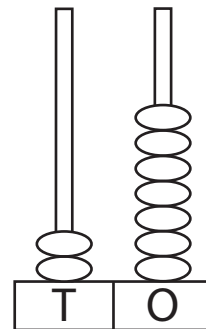


Figure : _____

Words : _____



PLACE VALUE-ABACUS

Name _____

Score _____

Answer key

PV:I:40

Write the number shown on each abacus.

1)

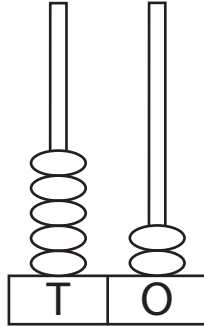


Figure : 52

Words : Fifty two

2)

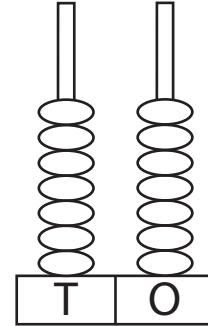


Figure : 77

Words : Seventy seven

3)

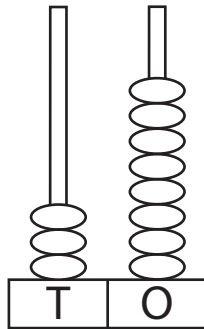


Figure : 38

Words : Thirty eight

4)

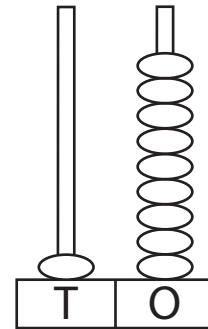


Figure : 19

Words : Nineteen

5)

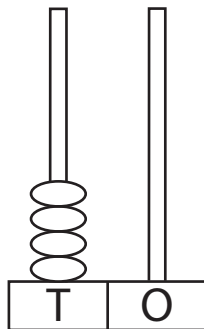


Figure : 40

Words : Forty

6)

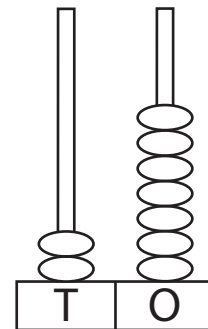


Figure : 27

Words : Twenty seven