



# PLACE VALUE

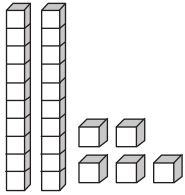
Name \_\_\_\_\_

Score \_\_\_\_\_

PV:I:18

Write down the number of tens and ones using the blocks.

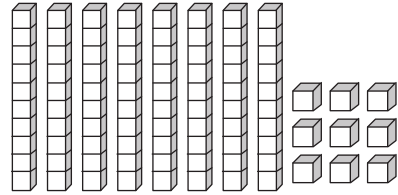
1)



Tens

Ones

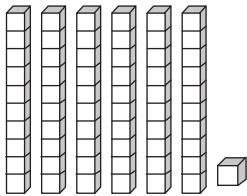
2)



Tens

Ones

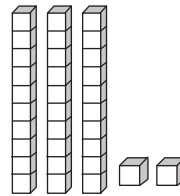
3)



Tens

Ones

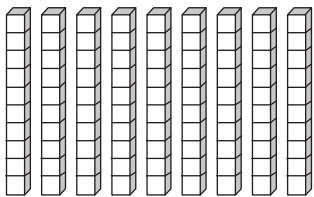
4)



Tens

Ones

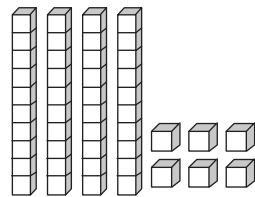
5)



Tens

Ones

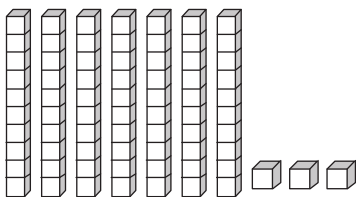
6)



Tens

Ones

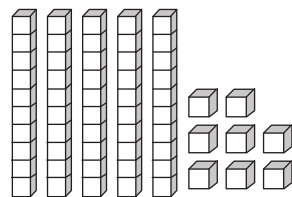
7)



Tens

Ones

8)



Tens

Ones



# PLACE VALUE

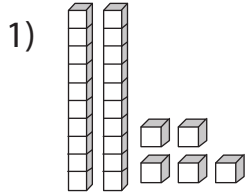
Name \_\_\_\_\_

Score \_\_\_\_\_

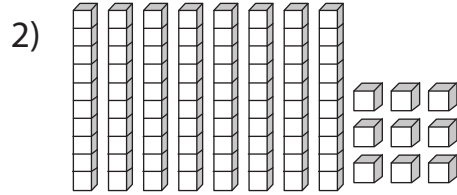
## Answer key

PV:I:18

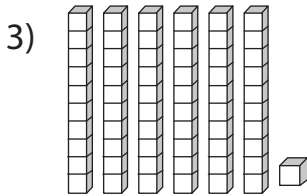
Write down the number of tens and ones using the blocks.



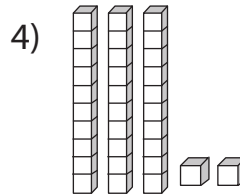
2      5  
Tens      Ones



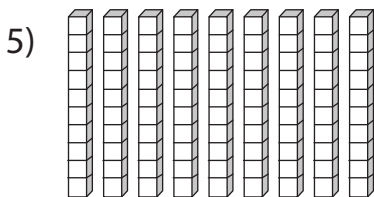
8      9  
Tens      Ones



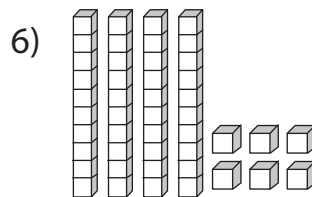
6      1  
Tens      Ones



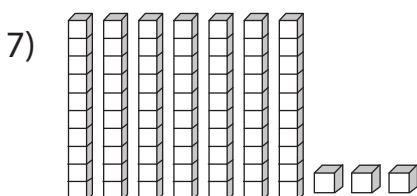
3      2  
Tens      Ones



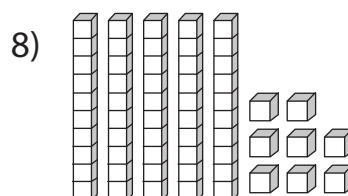
9      0  
Tens      Ones



4      6  
Tens      Ones



7      3  
Tens      Ones



5      8  
Tens      Ones