



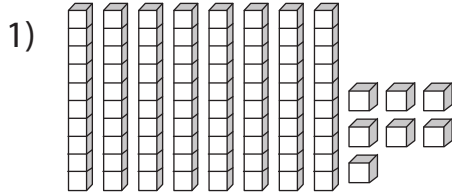
PLACE VALUE

Name _____

Score _____

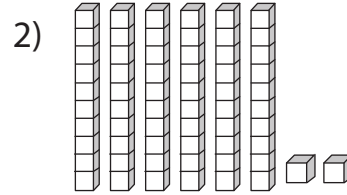
PV:I:17

Write down the number of tens and ones using the blocks.



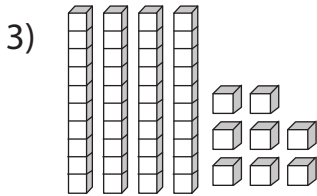
Tens

Ones



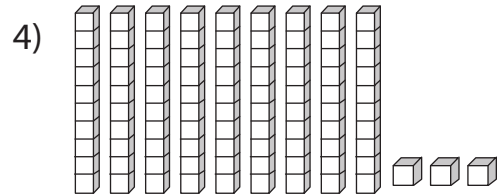
Tens

Ones



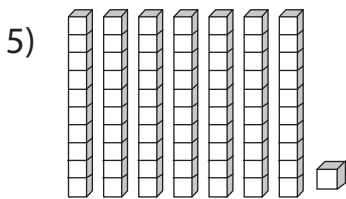
Tens

Ones



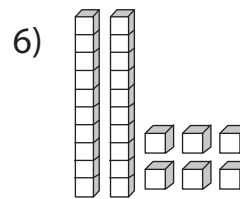
Tens

Ones



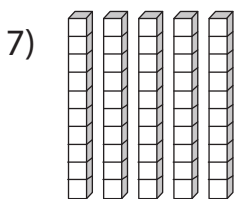
Tens

Ones



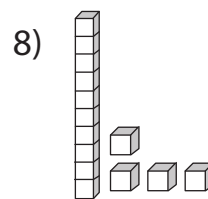
Tens

Ones



Tens

Ones



Tens

Ones



PLACE VALUE

Name _____

Score _____

Answer key

PV:I:17

Write down the number of tens and ones using the blocks.

