



PLACE VALUE

Name _____

Score _____

PV:I:09

Draw any picture of your choice to represent the tens and ones.

3 tens and 1 ones

1 tens and 6 ones

2 tens and 6 ones

1 tens and 0 ones

2 tens and 2 ones

1 tens and 7 ones

1 tens and 9 ones

2 tens and 7 ones



PLACE VALUE

Name _____


Score _____

Answer key

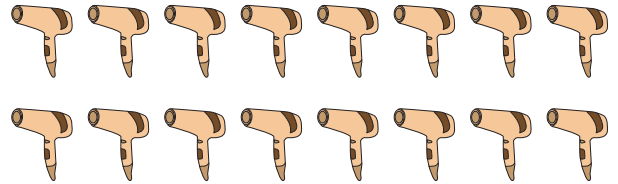
PV:I:09

Draw any picture of your choice to represent the tens and ones.

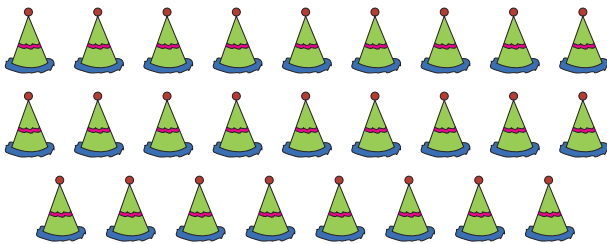
3 tens and 1 ones



1 tens and 6 ones




2 tens and 6 ones




1 tens and 0 ones



2 tens and 2 ones



1 tens and 7 ones



1 tens and 9 ones



2 tens and 7 ones

