



# PLACE VALUE

Name \_\_\_\_\_

Score \_\_\_\_\_

PV:I:08

Draw any picture of your choice to represent the tens and ones.

2 tens and 1 ones

2 tens and 9 ones

1 tens and 4 ones

2 tens and 7 ones

1 tens and 8 ones

3 tens and 3 ones

2 tens and 0 ones

1 tens and 2 ones



# PLACE VALUE

Name \_\_\_\_\_


Score \_\_\_\_\_

## Answer key


PV:I:08

Draw any picture of your choice to represent the tens and ones.

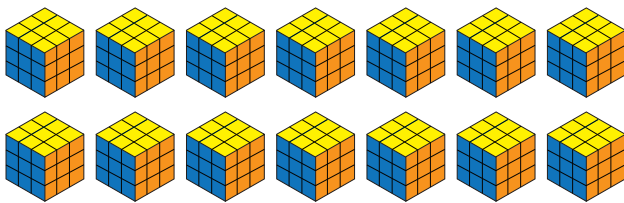
2 tens and 1 ones



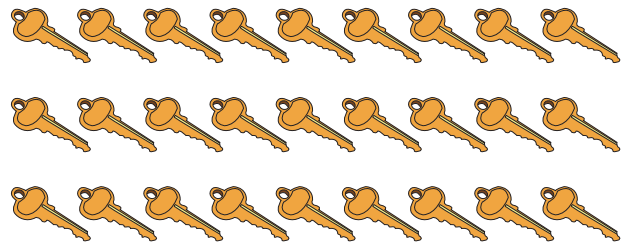
2 tens and 9 ones




1 tens and 4 ones




2 tens and 7 ones



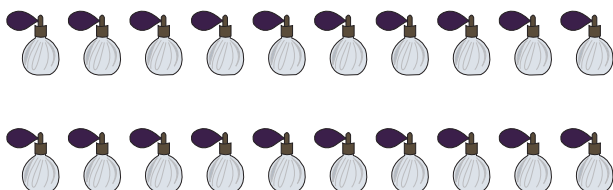
1 tens and 8 ones



3 tens and 3 ones



2 tens and 0 ones



1 tens and 2 ones

