



PLACE VALUE

Name _____

Score _____

PV:I:07

Draw any picture of your choice to represent the tens and ones.

2 tens and 4 ones

1 tens and 1 ones

2 tens and 6 ones

3 tens and 0 ones

1 tens and 3 ones

2 tens and 8 ones

3 tens and 2 ones

1 tens and 5 ones



PLACE VALUE

Name _____

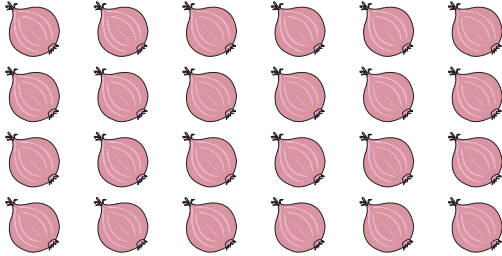
Score _____

Answer key


PV:I:07

Draw any picture of your choice to represent the tens and ones.


2 tens and 4 ones




1 tens and 1 ones




2 tens and 6 ones




3 tens and 0 ones




1 tens and 3 ones



2 tens and 8 ones



3 tens and 2 ones



1 tens and 5 ones

