



# PERIMETER OF TRIANGLES

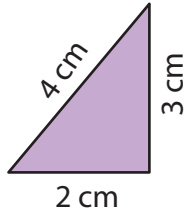
Name \_\_\_\_\_

Score \_\_\_\_\_

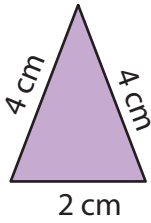
PT:40

Find the perimeter of each triangle and match the following.

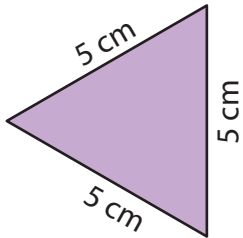
1)



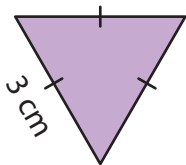
2)



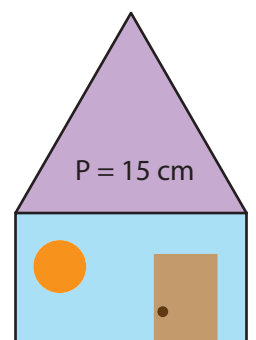
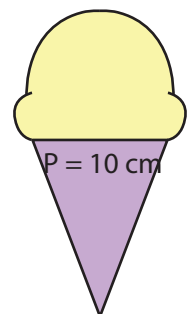
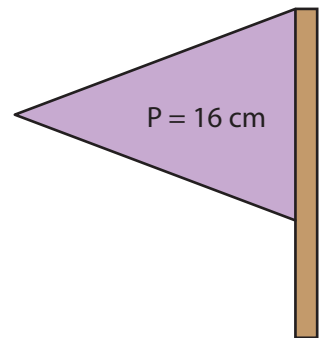
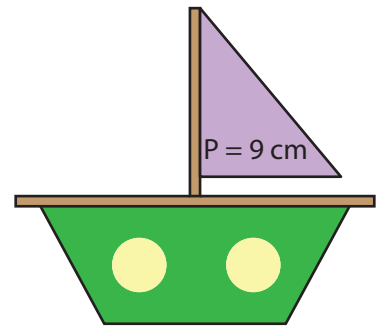
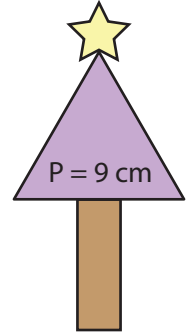
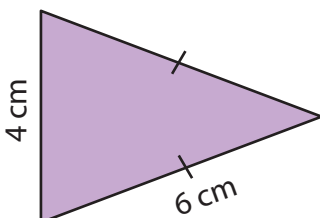
3)



4)



5)





# PERIMETER OF TRIANGLES

Name \_\_\_\_\_

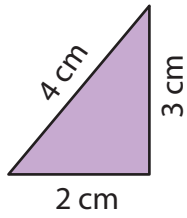
Score \_\_\_\_\_

## Answer key

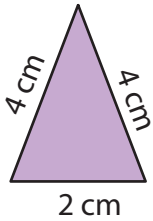
PT:40

Find the perimeter of each triangle and match the following.

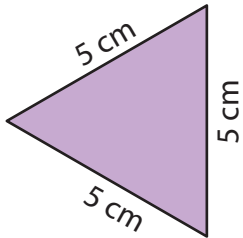
1)



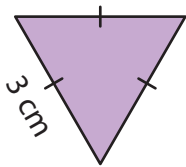
2)



3)



4)



5)

