



PERIMETER OF TRIANGLES

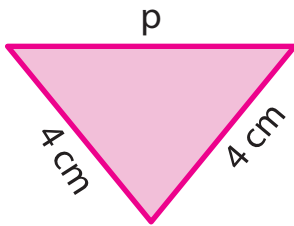
Name _____

Score _____

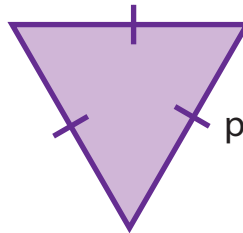
PT:24

Find the measurement of side p in each triangle. Cut the answers from the bottom of the sheet and paste them.

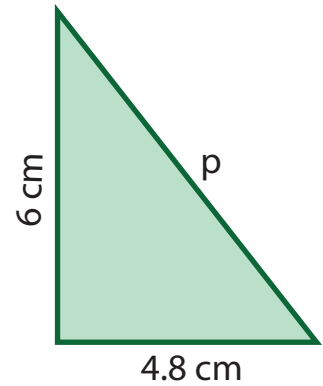
1) Perimeter = 13 cm



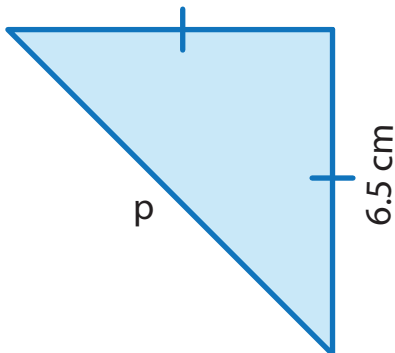
2) Perimeter = 12 cm



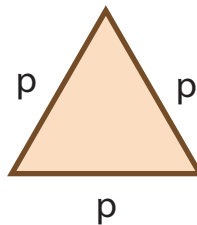
3) Perimeter = 17.8 cm



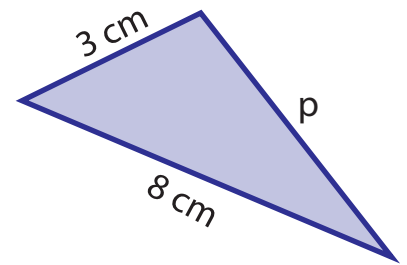
4) Perimeter = 22 cm



5) Perimeter = 9 cm



6) Perimeter = 17 cm



$p = 6 \text{ cm}$

$p = 4 \text{ cm}$

$p = 7 \text{ cm}$

$p = 9 \text{ cm}$

$p = 5 \text{ cm}$

$p = 3 \text{ cm}$



PERIMETER OF TRIANGLES

Name _____

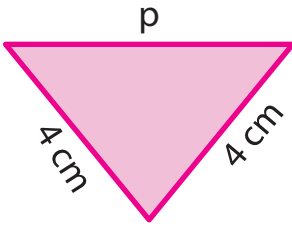
Score _____

Answer key

PT:24

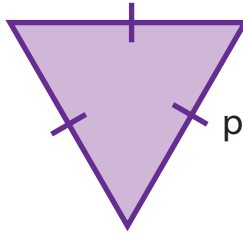
Find the measurement of side p in each triangle. Cut the answers from the bottom of the sheet and paste them.

1) Perimeter = 13 cm



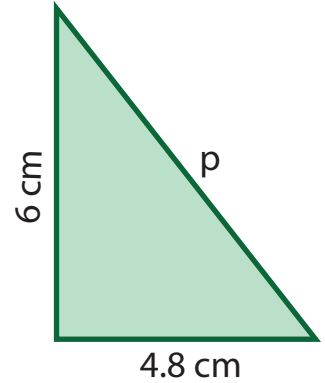
p = 5 cm

2) Perimeter = 12 cm



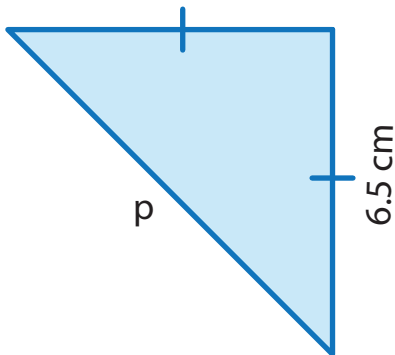
p = 4 cm

3) Perimeter = 17.8 cm



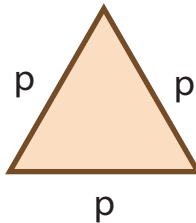
p = 7 cm

4) Perimeter = 22 cm



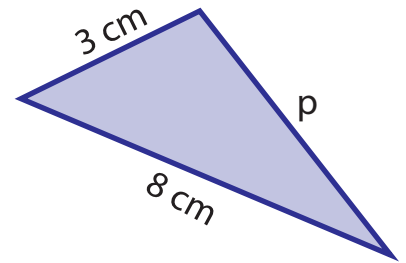
p = 9 cm

5) Perimeter = 9 cm



p = 3 cm

6) Perimeter = 17 cm



p = 6 cm

p = 6 cm

p = 4 cm

p = 7 cm

p = 9 cm

p = 5 cm

p = 3 cm