



PERIMETER OF TRIANGLES

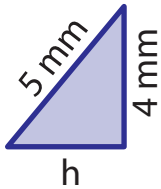
Name _____

Score _____

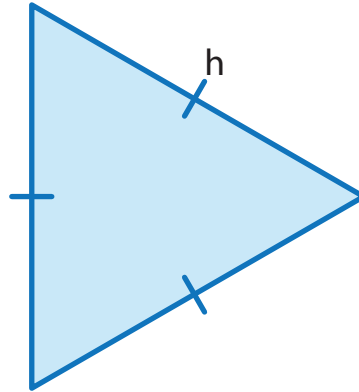
PT:22

Find the measurement of side h in each triangle. Cut the answers from the bottom of the sheet and paste them.

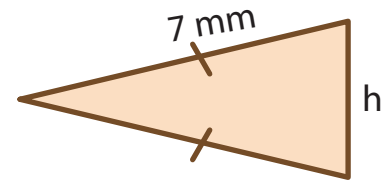
1) Perimeter = 12 mm



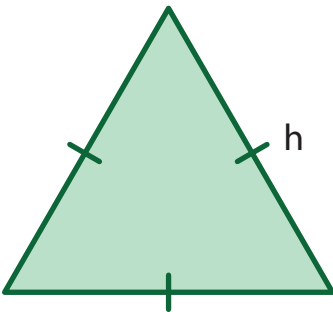
2) Perimeter = 24 mm



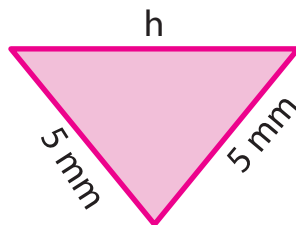
3) Perimeter = 18 mm



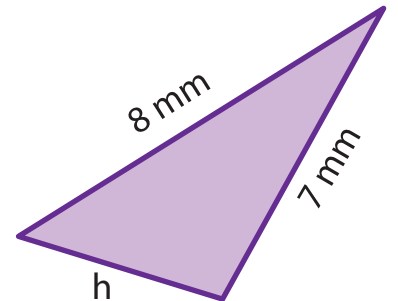
4) Perimeter = 21 mm



5) Perimeter = 16 mm



6) Perimeter = 20 mm



$h = 6 \text{ mm}$

$h = 5 \text{ mm}$

$h = 4 \text{ mm}$

$h = 8 \text{ mm}$

$h = 7 \text{ mm}$

$h = 3 \text{ mm}$



PERIMETER OF TRIANGLES

Name _____

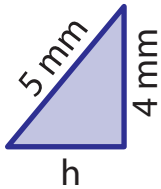
Score _____

Answer key

PT:22

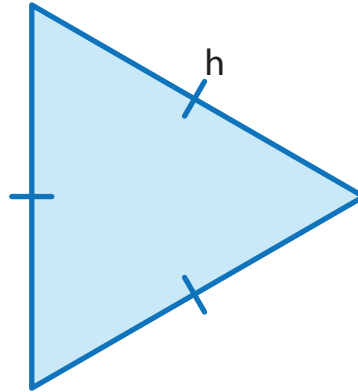
Find the measurement of side h in each triangle. Cut the answers from the bottom of the sheet and paste them.

1) Perimeter = 12 mm



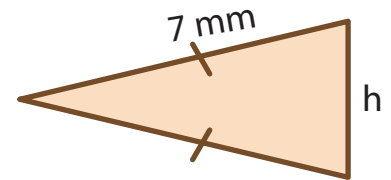
$$h = 3 \text{ mm}$$

2) Perimeter = 24 mm



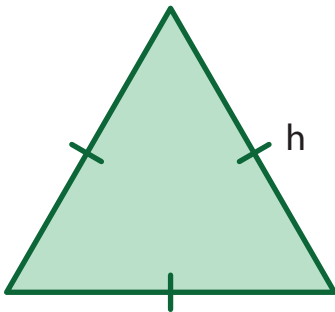
$$h = 8 \text{ mm}$$

3) Perimeter = 18 mm



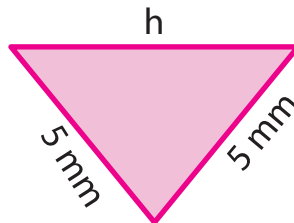
$$h = 4 \text{ mm}$$

4) Perimeter = 21 mm



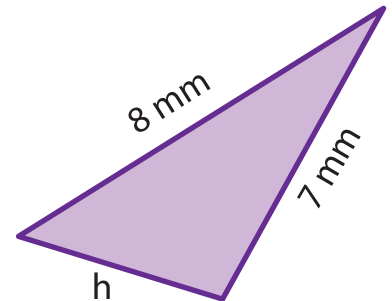
$$h = 7 \text{ mm}$$

5) Perimeter = 16 mm



$$h = 6 \text{ mm}$$

6) Perimeter = 20 mm



$$h = 5 \text{ mm}$$

$$h = 6 \text{ mm}$$

$$h = 5 \text{ mm}$$

$$h = 4 \text{ mm}$$

$$h = 8 \text{ mm}$$

$$h = 7 \text{ mm}$$

$$h = 3 \text{ mm}$$