



PERIMETER OF TRIANGLES

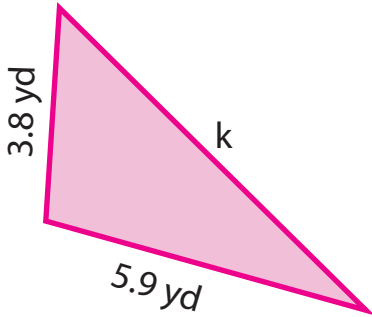
Name _____

Score _____

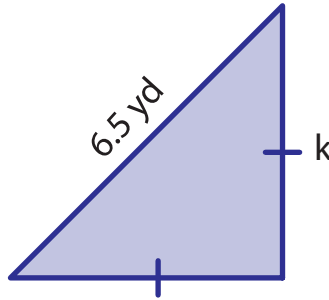
PT:20

Find the measurement of side k in each triangle. Cut the answers from the bottom of the sheet and paste them.

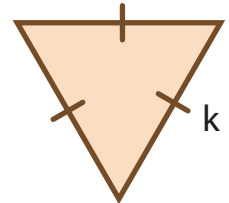
1) Perimeter = 17.2 yd



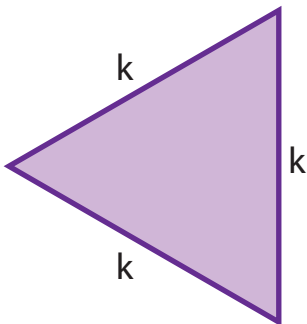
2) Perimeter = 15.7 yd



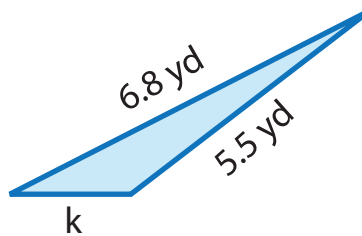
3) Perimeter = 10.2 yd



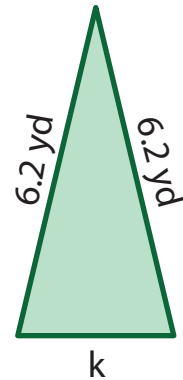
4) Perimeter = 17.4 yd



5) Perimeter = 14 yd



6) Perimeter = 15 yd



$k = 3.4$ yd

$k = 2.6$ yd

$k = 5.8$ yd

$k = 7.5$ yd

$k = 1.7$ yd

$k = 4.6$ yd



PERIMETER OF TRIANGLES

Name _____

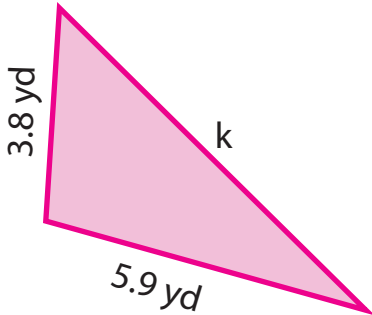
Score _____

Answer key

PT:20

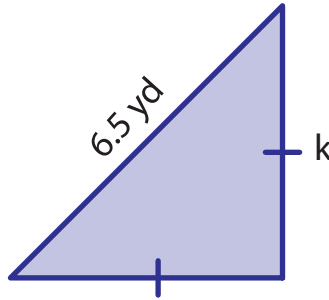
Find the measurement of side k in each triangle. Cut the answers from the bottom of the sheet and paste them.

1) Perimeter = 17.2 yd



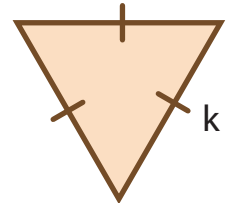
$$k = 7.5 \text{ yd}$$

2) Perimeter = 15.7 yd



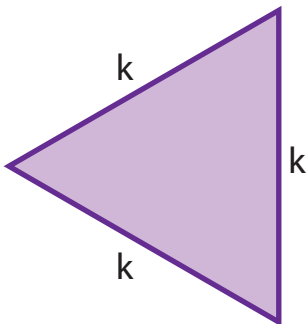
$$k = 4.6 \text{ yd}$$

3) Perimeter = 10.2 yd



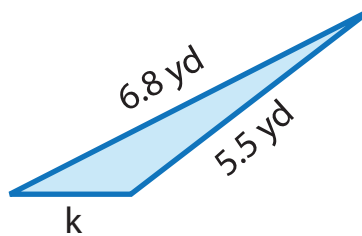
$$k = 3.4 \text{ yd}$$

4) Perimeter = 17.4 yd



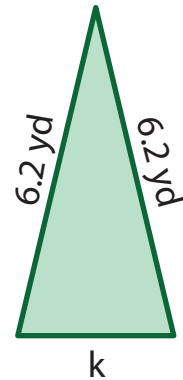
$$k = 5.8 \text{ yd}$$

5) Perimeter = 14 yd



$$k = 1.7 \text{ yd}$$

6) Perimeter = 15 yd



$$k = 2.6 \text{ yd}$$

$$k = 3.4 \text{ yd}$$

$$k = 2.6 \text{ yd}$$

$$k = 5.8 \text{ yd}$$

$$k = 7.5 \text{ yd}$$

$$k = 1.7 \text{ yd}$$

$$k = 4.6 \text{ yd}$$